

2002 Mathematics

Higher – Paper 2

Finalised Marking Instructions

1. Marks must be assigned in accordance with these marking instructions. In principle, marks are awarded for what is correct, rather than marks deducted for what is wrong.
2. Award one mark for each 'bullet' point. Each error should be underlined in RED at the point in the working where it first occurs, and not at any subsequent stage of the working.
3. The working subsequent to an error must be followed through by the marker with possible full marks for the subsequent working, provided that the difficulty involved is approximately similar. Where, subsequent to an error, the working is eased, a deduction(s) of mark(s) should be made.
This may happen where a question is divided into parts. In fact, failure to even answer an earlier section does not preclude a candidate from assuming the result of that section and obtaining full marks for a later section.
4. Correct working should be ticked (✓). This is essential for later stages of the SQA procedures. Where working subsequent to an error(s) is correct and scores marks, it should be marked with a crossed tick (✗). In appropriate cases attention may be directed to work which is not quite correct (e.g. bad form) but which has not been penalised, by underlining with a dotted or wavy line.
Work which is correct but inadequate to score any marks should be corrected with a double cross tick (✘).
5.
 - The total mark for each section of a question should be entered in red in the **outer** right hand margin, opposite the end of the working concerned.
 - Only the mark should be written, **not** a fraction of the possible marks.
 - These marks should correspond to those on the question paper and these instructions.
6. It is of great importance that the utmost care should be exercised in adding up the marks. Where appropriate, all summations for totals and grand totals must be carefully checked.
Where a candidate has scored zero marks for any question attempted, "0" should be shown against the answer.
7. As indicated on the front of the question paper, full credit should only be given where the solution contains appropriate working. Accept answers arrived at by inspection or mentally where it is possible for the answer so to have been obtained. Situations where you may accept such working will normally be indicated in the marking instructions.

cont/

8. Do not penalise:
 - working subsequent to a correct answer
 - omission of units
 - bad form
 - legitimate variations in numerical answers
 - correct working in the “wrong” part of a question

9. No marks should be awarded for a part of an answer which shows a complete misunderstanding of any fundamental principle or complete ignorance of any process involved in that part.

10. If in doubt between two marks, give an intermediate mark, but without fractions. When in doubt between consecutive numbers, give the higher mark.

11. In cases of difficulty covered neither in detail nor in principle in the Instructions, attention may be directed to the assessment of particular answers by making a PA referral. Write PA at the top left of the front cover of the script and complete the PA referral sheet. This reference must be restricted to genuine cases of difficulty. **Also**, write the letters “PA” (in red) on Form Ex6 immediately after the candidate’s name.

12. No marks should be deducted at this stage for careless or badly arranged work. In cases where writing or arrangement is very bad, a note may be made on the upper left-hand corner of the front cover of the script.

13. Do not write any comments on the scripts. A summary of acceptable notation is given on page 4.

Summary

Throughout the examination procedures many scripts are remarked. It is essential that markers follow common procedures:

- 1 Tick correct working.
- 2 Put a mark in the **right-hand margin to match the marks allocations on the question paper.**
- 3 Do **not** write marks as fractions.
- 4 Put each mark **at the end** of the candidate’s response to the question.
- 5 **Follow through** errors to see if candidates can score marks subsequent to the error.
- 6 Do **not** write any comments on the scripts.

Higher Mathematics : A Guide to Standard Signs and Abbreviations

Remember - No comments on the scripts. Please use the following and nothing else.

Signs

✓	The tick. You are not expected to tick every line but of course you must check through the whole of a response.	$\frac{dy}{dx} = 4x - 7$ ✓ • $4x - 7 = 0$ ✕ $x = \frac{7}{4}$ $y = 3\frac{7}{8}$ ✕ •	margins	2
✕	The cross and underline. Underline an error and place a cross at the end of the line.			
✕	The tick-cross. Use this to show correct work where you are following through subsequent to an error.	$C = (1, -1)$ ✕ $m = \frac{3 - (-1)}{4 - 1}$ $m_{rad} = \frac{4}{3}$ ✕ • $m_{igt} = -\frac{1}{3}$ $m_{igt} = -\frac{3}{4}$ ✕ • $y - 3 = -\frac{3}{4}(x - 2)$ ✕ •	3	
✕	The double cross-tick. Use this to show correct work but which is inadequate to score any marks.			
∧	The roof. Use this to show something is missing such as a crucial step in a proof or a 'condition' etc.	$x^2 - 3x = 28$ ✓ • $x = 7$ ∧ ✕	1	
˜	The tilde. Use this to indicate a minor transgression which is not being penalised (such as bad form).			
RE	Repeated error (which would generally not be penalised within the same question).	$\sin 2A = 2 \sin A \cos A$ ✓ • $= 2 \times \frac{1}{3} \times \frac{3}{4}$ ✕ $= \frac{1}{2}$ ✕ • $\cos 2A = \cos^2 A - \sin^2 A$ ✓ • $= \frac{9}{16} - \frac{1}{9}$ RE ✕ • $= \frac{65}{144}$ ✕ •	5	
BoD	Benefit of Doubt. Use this where you have to decide between two consecutive marks and award the higher.			
EA	Eased. Where working is found correct whilst following through subsequent to an error, the working has been eased sufficiently for a mark not to be awarded.	$\log_3(x - 2) = 1$ ✕ $(x - 2) = 3^1$ ✕ • $x - 2 = 3$ $x = 5$ EA ✕	1	

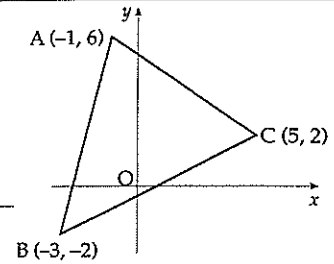
All of these are to help us be more consistent and accurate.

It goes without saying that however accurate you are in marking, it is to no avail unless you have added the marks up correctly. Please double check totals!!

Give 1 mark for each •

Illustrations of evidence for awarding each •

- 1 Triangle ABC has vertices A(-1, 6), B(-3, -2) and C(5, 2). Find
- (a) the equation of the line p , the median from C of triangle ABC.
 - (b) the equation of the line q , the perpendicular bisector of BC.
 - (c) the coordinates of the point of intersection of the lines p and q .



3
4
1

- | | | | |
|---|---------------------|---------|------|
| 1 | 1.1.1 ++ | CN C | 02/2 |
| a | ans : $y = 2$ | 3 marks | |
| b | ans : $y = -2x + 2$ | 4 marks | |
| c | (0, 2) | 1 mark | |

- ¹ ss : determine midpoint coordinates
- ² pd : determine gradient thr' 2 pts
- ³ ic : state equation of st line
- ⁴ ss : determine midpoint coordinates
- ⁵ pd : determine gradient thr' 2 pts
- ⁶ ss : determine gradient at right angles to •⁵
- ⁷ ic : state equation of st line
- ⁸ pd : process intersection

- ¹ $F = \text{mid}_{AB} = (-2, 2)$ ss
- ² $m_{FC} = 0$ stated or implied by •³ pd
- ³ equ FC is $y = 2$ ic
- ⁴ $M = \text{mid}_{BC} = (1, 0)$ ss
- ⁵ $m_{BC} = \frac{1}{2}$ pd
- ⁶ $m_{\perp} = -2$ ss
- ⁷ $y - 0 = -2(x - 1)$ ic
- ⁸ (0, 2) pd

Notes

- 1 For •³, accept $y - 2 = 0(x + 2)$ or $y - 2 = (\text{value of } m, \text{ simplified or not})(x + 2)$
- 2 •⁷ is only available as a consequence of finding a perpendicular gradient
- 3 The diagrams below illustrate some of the 'lines' which can be accorded any marks. For example, in (b) a line perp. to BC passing through C earns marks •⁵ and •⁶ only.
- 4 For introducing decimals, work to 2 d.p.

For (a) Perp. bis of AB

- | | |
|-------------------------------|------|
| $\text{midpt} = (-2, 2)$ | ✓ •1 |
| $m_{AB} = 4$ | ✗ |
| $m_{\perp} = -\frac{1}{4}$ | ✗ |
| $y - 2 = -\frac{1}{4}(x + 2)$ | ✗ •3 |
- 2 marks given

For (a) Altitude thr' C

- | | |
|-------------------------------|------|
| $m_{AB} = 4$ | ✓ •2 |
| $m_{\perp} = -\frac{1}{4}$ | ✗ |
| $y - 2 = -\frac{1}{4}(x - 5)$ | ✓ •3 |
- 2 marks given

(b) Median thr' A

- | | |
|-------------------------|------|
| $\text{midpt} = (1, 0)$ | ✓ •4 |
| $m_{\text{med}} = -3$ | ✓ •5 |
| $y - 0 = -3(x - 1)$ | ✗ |
- 2 marks given

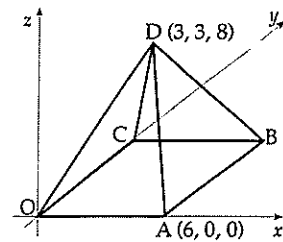
(b) Altitude thr' A

- | | |
|------------------------|------|
| $m_{BC} = \frac{1}{2}$ | ✓ •5 |
| $m_{\text{perp}} = -2$ | ✓ •6 |
| $y - 6 = -2(x + 1)$ | ✗ |
- 2 marks given

Give 1 mark for each •

Illustrations of evidence for awarding each •

2 The diagram shows a square-based pyramid of height 8 units. Square OABC has a side length of 6 units. The coordinates of A and D are (6, 0, 0) and (3, 3, 8). C lies on the y-axis.



- (a) Write down the coordinates of B.
- (b) Determine the components of \vec{DA} and \vec{DB} .
- (c) Calculate the size of angle ADB.

1
2
4

2 3.1.11 C C 02/66

a ans : (6, 6, 0) 1 mark

b ans : $\vec{DA} = \begin{pmatrix} 3 \\ -3 \\ -8 \end{pmatrix}$ $\vec{DB} = \begin{pmatrix} 3 \\ 3 \\ -8 \end{pmatrix}$ 2 marks

c ans : 38.7° 4 marks

- ¹ ic : interpret diagram
- ² ic : write down components of a vector
- ³ ic : write down components of a vector
- ⁴ ss : use e.g. scalar product formula
- ⁵ pd : process lengths
- ⁶ pd : process scalar product
- ⁷ pd : process angle

•¹ $B = (6, 6, 0)$ ic

•² $\vec{DA} = \begin{pmatrix} 3 \\ -3 \\ -8 \end{pmatrix}$ ic

•³ $\vec{DB} = \begin{pmatrix} 3 \\ 3 \\ -8 \end{pmatrix}$ ic

•⁴ $\cos \hat{A}DB = \frac{\vec{DA} \cdot \vec{DB}}{|\vec{DA}| |\vec{DB}|}$ stated/implied by •⁷ ss

•⁵ $|\vec{DA}| = \sqrt{82}$, $|\vec{DB}| = \sqrt{82}$ pd

•⁶ $\vec{DA} \cdot \vec{DB} = 64$ pd

•⁷ $\hat{A}DB = 38.7^\circ$ pd

Alternative method 1 for •⁴ to •⁷.

•⁴ $\cos \hat{A}DB = \frac{a^2 + b^2 - d^2}{2ab}$ ss

•⁵ $a = b = \sqrt{82}$ pd

•⁶ $\vec{BA} = \begin{pmatrix} 0 \\ 6 \\ 0 \end{pmatrix} \Rightarrow d = 6$ pd

•⁷ $\hat{A}DB = 38.7^\circ$ pd

Alternative method 2 for •⁴ to •⁷.

•⁴ $\triangle ADB$ isosceles, half base = 3 ss

•⁵ $a = b = \sqrt{82}$ pd

•⁶ $\sin \frac{1}{2} ADB = \frac{3}{\sqrt{82}}$ ss

•⁷ $\hat{A}DB = 38.7^\circ$ pd

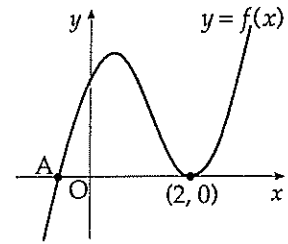
Note

- 1 For •⁷ accept 38.6° or 0.67 radians or 0.68 radians and answers which round to these values.
- 2 Do not penalise premature rounding before •⁷. •⁷ is the only mark available for calculations.
- 3 Any formula quoted at •⁴ must relate to the data or labelling in this question.
- 4 Treat $\vec{DA} = d - a$ and $\vec{DB} = d - b$ as a repeated error (RE) (•² not available).
- 5 Treat $\vec{DA} = a + d$ and $\vec{DB} = b + d$ as a repeated error (RE) (•² not available).
- 6 Calculations of the angles AOB (45°) or AOD (70.7°) may earn 3 of the last 4 marks provided the correct use of the scalar product has been demonstrated.

Give 1 mark for each •

Illustrations of evidence for awarding each •

3 The diagram shows part of the graph of the curve with equation $y = 2x^3 - 7x^2 + 4x + 4$.



(a) Find the x -coordinate of the maximum turning point. 5

(b) Factorise $2x^3 - 7x^2 + 4x + 4$. 3

(c) State the coordinates of the point A and hence find the values of x for which $2x^3 - 7x^2 + 4x + 4 < 0$. 2

3 1.3.12, 2.1.3 NC. C 02/23

a ans : $x = \frac{1}{3}$ 5 marks

b ans : $(x-2)(2x+1)(x-2)$ 3 marks

c ans : $A(-\frac{1}{2}, 0)$, $x < -\frac{1}{2}$ 2 marks

- 1 ss : know to differentiate
- 2 pd : differentiate
- 3 ss : know to set derivative to zero
- 4 pd : start solving process of equation
- 5 pd : complete solving process
- 6 ss : strategy for cubic eg synth division
- 7 ic : extract quadratic factor
- 8 pd : complete the cubic factorisation
- 9 ic : interpret the factors
- 10 ic : interpret the diagram

- 1 $f'(x) = \dots$ ss
- 2 $6x^2 - 14x + 4$ pd
- 3 $6x^2 - 14x + 4 = 0$ ss
- 4 $(3x-1)(x-2)$ pd
- 5 $x = \frac{1}{3}$ pd
- 6

...	2	-7	4	4
...
...	0

 ss
- 7 $2x^2 - 3x - 2$ ic
- 8 $(x-2)(2x+1)(x-2)$ pd
- 9 $A(-\frac{1}{2}, 0)$ ic
- 10 $x < -\frac{1}{2}$ ic

Notes

- 1 •7 may be awarded for repeated synthetic divisions to arrive at **another two with** zero remainders.
- 2 The “= 0” shown at •3 must appear at least once somewhere in the working between •1 and •5 (but not necessarily at •3)
- 3 At •4, the common factor of 2 may be included at the front or inside one of the binomials.
- 4 In (b) if $(x-2)^2(x+\frac{1}{2})$ appears *ex nihilo* award 1 mark out of the 3 available.
- 5 Candidates who attempt to find a solution via a graphics calculator earn no marks. The only acceptable method is via calculus.
- 6 For •9 accept $x = -\frac{1}{2}$
- 7 For •10 accept $x \leq -\frac{1}{2}$.

Give 1 mark for each •

Illustrations of evidence for awarding each •

- 4 A man decides to plant a number of fast-growing trees as a boundary between his property and the property of his next door neighbour. He has been warned, however, by the local garden centre that, during any year, the trees are expected to increase in height by 0.5 metres. In response to this warning he decides to trim 20% off the height of the trees at the start of any year.
- (a) If he adopts the "20% pruning policy", to what height will he expect the trees to grow in the long run? 3
- (b) His neighbour is concerned that the trees are growing at an alarming rate and wants assurances that the trees will grow no taller than 2 metres. What is the minimum percentage that the trees will need to be trimmed each year so as to meet this condition? 3

4 1.4.3 ++ CN C 02/21
 a ans : 2.5 metres 3 marks
 b ans : trim 25% 3 marks

- ¹ ic : interpret the decay factor
- ² ss : strategy for limit
- ³ pd : process limit
- ⁴ ss : reverse strategy for limit
- ⁵ pd : process
- ⁶ ic : interpret scale factor

- ¹ 0.8 stated or implied ic
- ² eg $l = 0.8l + 0.5$ or $l = \frac{0.5}{1-0.8}$ ss
- ³ $-1 < 0.8 < 1$ so $l = 2.5$ metres pd
- ⁴ $2 = 2m + 0.5$ ss
- ⁵ $m = 0.75$ pd
- ⁶ trim 25% ic

marked example

<u>0.2</u>	X			
$l = 0.2l + 0.5$	✓	•2		
$l = 0.625$ metres	X	∧		1
<hr/>				
$2 = 2m + 0.5$	✓	•4		
$m = 0.75$	✓	•5		
trim <u>75%</u>	X			2

Note

1 Correct answers with no working gain no marks.

in (a)

1 For •³ accept $0 < 0.8 < 1$ so $l = 2.5$ metres

2 For $a = 1.2$
 $L = 1.2L - 0.5$
 $L = 2.5$ award NO marks.

in (b)

3 Trial & improvement is barely acceptable but the three marks are available as follows
 for 1st trial with a guess $> 20\%$ give •¹
 for 2nd trial + improvement give •²
 for more trial(s) leading to 25% give •³

Candidates may strike lucky by :

Try pruning at 25%

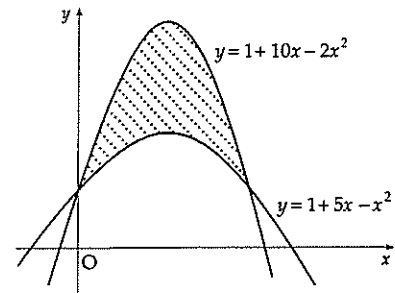
Then $L = 0.75L + 0.5 = 2$ giving $L = 2$ (metres)

This needs to be accorded 3 marks.

Give 1 mark for each •

Illustrations of evidence for awarding each •

5 Calculate the shaded area enclosed between the parabolas with equations $y = 1 + 10x - 2x^2$ and $y = 1 + 5x - x^2$.



6

5 2.2.7 CN C 02/84
ans : $20\frac{5}{6}$ 6 marks

- 1 ss : find intersections
- 2 ss : know to find limits
- 3 ss : know to integrate (upper – lower)
- 4 pd : simplify
- 5 pd : integrate
- 6 pd : process limits

- 1 $1 + 10x - 2x^2 = 1 + 5x - x^2$ ss
- 2 $x = 0, 5$ and $\int_0^5 ()$ ss
- 3 $\int ((1 + 10x - 2x^2) - (1 + 5x - x^2)) dx$ ss
- 4 $\int (5x - x^2) dx$ pd
- 5 $\frac{5}{2}x^2 - \frac{1}{3}x^3$ pd
- 6 $20\frac{5}{6}$ pd

Notes

- 1 Candidates who do not simplify (•4) before integrating may be awarded •4 for integrating the upper function correctly and may be awarded •5 for integrating the lower function. The last mark is for evaluating and stating the area.
- 2 For candidates who find two separate areas and subtract - use the illustration below as a guide.
- 2 Candidates who attempt to find a solution via a graphics calculator earn no marks. The only acceptable method is via calculus.

illustration for Note 2

- $1 + 10x - 2x^2 = 1 + 5x - x^2$ ✓ •1
 - $x^2 - 5x = 0$
 - $x(x - 5) = 0$
 - $x = 0, 5$ ✓
 - \int_0^5 or \int_0^5 (somewhere below) ✓ •2
 - $\int (1 + 10x - 2x^2) dx$ ✓ •3
 - $x + 5x^2 - \frac{2}{3}x^3$ ✓ •4
 - $\int (1 + 5x - x^2) dx$
 - $x + \frac{5}{2}x^2 - \frac{1}{3}x^3$ ✓ •5
 - $46\frac{2}{3}, 25\frac{5}{6},$ and area = $20\frac{5}{6}$ ✓ •6
- 6 marks

variation on a theme

- $1 + 5x - x^2 = 1 + 10x - 2x^2$ ✓ •1
 - leading to $x = 0, 5$ ✓
 - $\int_0^5 ((1 + 5x - x^2) - (1 + 10x - 2x^2)) dx$ ✓ •2
 - $\int_0^5 (-5x + x^2) dx$ ✗ •3
 - $\int_0^5 (-5x + x^2) dx$ ✗ •4
 - $[-\frac{5}{2}x^2 + \frac{1}{3}x^3]_0^5$ ✗ •5
 - $-20\frac{5}{6}$ so area = $20\frac{5}{6}$ ✗ •6
- 5 marks

Give 1 mark for each •

Illustrations of evidence for awarding each •

6 Find the equation of the tangent to the curve $y = 2 \sin\left(x - \frac{\pi}{6}\right)$ at the point where $x = \frac{\pi}{3}$.

4

6 1.1.6, 1.3.7, 3.2.2, 1.2.11 CN C 02/63

ans : $y = \sqrt{3}x + 1 - \frac{\pi}{\sqrt{3}}$ 4 marks

- 1 pd : find derivative
- 2 ss : know derivative at $x = \dots$ represents grad.
- 3 pd : find corresponding y -coordinate
- 4 ic : state equation of tangent

- 1 $\frac{dy}{dx} = 2 \cos\left(x - \frac{\pi}{6}\right)$ *pd*
- 2 $m = \sqrt{3}$ *ss*
- 3 $y_{x=\frac{\pi}{3}} = 1$ *pd*
- 4 $y - 1 = \sqrt{3}\left(x - \frac{\pi}{3}\right)$ *ic*

Notes

- 1 Accept decimal equivalent for $\sqrt{3}$
- 2 •4 is only available if an attempt to find m is based on calculus.

$y = 2 \sin\left(x - \frac{\pi}{6}\right)$
 $y = 2 \sin(x - 30)$
 $\frac{dy}{dx} = 2 \cos(x - 30)$ ✗ •1

$m = \dots = \sqrt{3}$ ✓ •2
 $y_{x=30} = \dots = 1$ ✓ •3
 $y - 1 = \sqrt{3}(x - 60)$ ✗ •4

3 marks

$y = 2 \sin\left(x - \frac{\pi}{6}\right)$
 $\frac{dy}{dx} = 2 \cos\left(x - \frac{\pi}{6}\right)$ ✓ •1
 $\quad = 2 \cos(x - 30)$
 $m = \dots = \sqrt{3}$ ✓ •2
 $y_{x=30} = \dots = 1$ ✓ •3
 $y - 1 = \sqrt{3}(x - 60)$ ✗ •4

3 marks

	Give 1 mark for each •	Illustrations of evidence for awarding each •
7	Find the x -coordinate of the point where the graph of the curve with equation $y = \log_3(x-2) + 1$ intersects the x -axis.	3

7 3.3.1 CN C/AB 02/58
ans : $x = 2\frac{1}{3}$ 3 marks

- ¹ ss : know to isolate log term
- ² pd : express log equation as expo. equ.
- ³ pd : process

- ¹ $\log_3(x-2) = -1$ ss
- ² $x-2 = 3^{-1}$ pd
- ³ $x = 2\frac{1}{3}$ pd

Notes

1 Candidates who sketch the (related) function and conclude that the root is $2 < x < 3$ may be awarded 1 mark. (Do not accept "the root = 2").

$\log_3(x-2) = 1$ ✗

$(x-2) = 3$ ✗ •2

$x = 5$ ✗ eased

1 mark awarded

$-\log_3(x-2) = 1$ ✓

$\log_3(x-2)^{-1} = 1$ ✓ •1

$(x-2)^{-1} = 3$ ✓ •2

$x = 2\frac{1}{3}$ ✓ •3

3 marks awarded

$\log_3(x-2) + 1 = 0$

$(x-2) + 1 = \dots$ ✗

$\dots = 3^0$ ✓ •2

$x = 2$ ✗ eased

1 mark awarded

$\log_3(x-2) + \log_3 3 = \dots$ ✓

$\dots = \log_3 1$ ✓

$3(x-2) = 1$

$x = 2\frac{1}{3}$ ✓

award 3 marks

Give 1 mark for each •	Illustrations of evidence for awarding each •
<p>8 A point moves in a straight line such that its acceleration a is given by $a = 2(4 - t)^{\frac{1}{2}}$, $0 \leq t \leq 4$.</p> <p>If it starts at rest, find an expression for the velocity v where $a = \frac{dv}{dt}$.</p>	<p>4</p>
<p>8 3.2.3, 2.2.6 NC C 02/54</p> <p>ans : $V = -\frac{4}{3}(4 - t)^{\frac{3}{2}} + \frac{32}{3}$ 4 marks</p> <ul style="list-style-type: none"> •¹ ss : know to integrate acceleration •² pd : integrate •³ ic : use initial conditions with const of int •⁴ pd : process solution 	<ul style="list-style-type: none"> •¹ $V = \int (2(4 - t)^{\frac{1}{2}}) dt$ ss <li style="text-align: center;">stated or implied by •² •² $2 \times \frac{1}{-\frac{3}{2}}(4 - t)^{\frac{3}{2}}$ pd •³ $0 = 2 \times \frac{1}{-\frac{3}{2}}(4 - 0)^{\frac{3}{2}} + c$ ic •⁴ $c = 10\frac{2}{3}$ pd <p>Notes</p> <ol style="list-style-type: none"> 1 •³ and •⁴ are only available when a constant of integration is included. 2 Differentiation earns no marks. 3 Note that $\int_0^4 (2(4 - t)^{\frac{1}{2}}) dt \quad \text{only earns the first two marks.}$ $= \left[2 \times \frac{1}{-\frac{3}{2}}(4 - t)^{\frac{3}{2}} \right]_0^4$ $= 10\frac{2}{3}$

Give 1 mark for each •

Illustrations of evidence for awarding each •

9 Show that the equation $(1 - 2k)x^2 - 5kx - 2k = 0$ has real roots for all integer values of k .

5

9 2.1.5, 7, 9 CN AB 02/39

ans : proof 5 marks

- ¹ ss : know to use discriminant
- ² ic : pick out discriminant
- ³ pd : simplify to quadratic
- ⁴ ss : choose to draw table or graph
- ⁵ pd : complete proof using $\text{disc} \geq 0$

- ¹ discriminant = ss
- ² $\text{disc} = (-5k)^2 - 4(1 - 2k)(-2k)$ ic
- ³ $9k^2 + 8k$ pd
- ⁴ e.g. draw a table, graph complete the square ss
- ⁵ complete proof and conclusion relating to $\text{disc} \geq 0$ pd

Notes

- 1 The evidence for •4 will be
 $0, -\frac{8}{9}$ and a graph
 $0, -\frac{8}{9}$ and a table
 $0, -\frac{8}{9}$ and a completing the square
- 2 Treat $(5k)^2 - 4(1 - 2k)(-2k)$ as bad form.
- 3 Treat $-5k^2 - 4(1 - 2k)(-2k)$ as bad form.
 $25k^2 + 8k(1 - 2k)$
- 6 You will have to penalise $a = \dots, b = 5k, c = \dots$

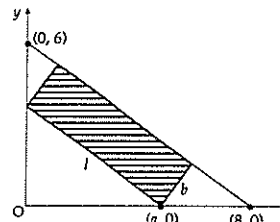
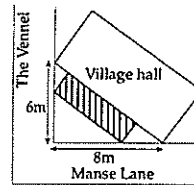
$25k^2 + 8k(1 - 2k)$	✓ •1, •2										
$9k^2 + 8k$	✓ •3										
$y = 9k^2 + 8k$											
<table style="margin: auto; border-collapse: collapse;"> <tr> <td style="border-right: 1px solid black; padding: 0 10px;">k</td> <td style="padding: 0 10px;">-2</td> <td style="padding: 0 10px;">-1</td> <td style="padding: 0 10px;">0</td> <td style="padding: 0 10px;">1</td> </tr> <tr> <td style="border-right: 1px solid black; padding: 0 10px;">$9k^2 + 8k$</td> <td style="padding: 0 10px;">4</td> <td style="padding: 0 10px;">1</td> <td style="padding: 0 10px;">0</td> <td style="padding: 0 10px;">17</td> </tr> </table>	k	-2	-1	0	1	$9k^2 + 8k$	4	1	0	17	✓ •4
k	-2	-1	0	1							
$9k^2 + 8k$	4	1	0	17							
$9k^2 + 8k \geq 0$											
$k(9k + 8) \geq 0$											
$k \geq 0$ or $k \leq -\frac{8}{9}$											
There are no integers between 0 and $-\frac{8}{9}$	✓ •5										
Hence all roots are real for integer k	5 marks										

$(-5k)^2 - 4(-2k)(-2k)$	✓ •1
$= 25k^2 - 16k^2$	✗
$= 9k^2$	✗ •2
which is not negative anywhere since k^2 is +ve and multiplied by a +ve number.	✗ eased
So all the roots are real whatever the value of k .	✗ •3
	3 marks

Give 1 mark for each •

Illustrations of evidence for awarding each •

10 The shaded rectangle on this map represents the planned extension to the village hall. It is hoped to provide the largest possible area for the extension. The coordinate diagram represents the right angled triangle of ground behind the hall. The extension has length l metres and breadth b metres, as shown. One corner of the extension is at the point $(a, 0)$.



- (a) (i) Show that $l = \frac{5}{4}a$.
 (ii) Express b in terms of a and hence deduce that the area, A m², of the extension is given by $A = \frac{3}{4}a(8 - a)$.
 (b) Find the value of a which produces the largest area of the extension.

3
4

10 1.3.15 CN AB 02/11

a ans : proof 3 marks

b ans : $a = 4$ 4 marks

- ¹ ss : select strategy and carry through
- ² ss : select strategy and carry through
- ³ ic : complete proof
- ⁴ ss : know to set derivative to zero
- ⁵ pd : differentiate
- ⁶ pd : solve equation
- ⁷ ic : justify maximum eg nature table

- ¹ proof of $l = \frac{5}{4}a$ ss
- ² $b = \frac{3}{4}(8 - a)$ ss
- ³ complete proof leading to $A = \dots$ ic
- ⁴ $\frac{dA}{da} = \dots 0$ ss
- ⁵ $6 - \frac{3}{2}a$ pd
- ⁶ $a = 4$ pd
- ⁷ e.g.nature table, comp the square ic

Notes

1 For •⁷ the minimum which is acceptable:

a or x	3	4	5
' $\frac{dy}{dx}$ ' or f' or gradient or m	+ve	0	-ve
		maximum	

Clearly something like is preferable:

a	4^-	4	4^+
$\frac{dA}{da}$	+ve	0	-ve
	∴	∴	∴
		maximum	

Notes

2 Trial & error/improvement earns NO marks

Minimum requirements

- (i) from diagram with hyp.=10
 $L = \frac{10}{8}a \Rightarrow L = \frac{5}{4}a$
- (ii) accept working back from A for •² but do not accept going forward again for •³.


Completing the sq 'ending'

$$\begin{aligned}
 A &= -\frac{3}{4}(a^2 - 8a) \\
 &= -\frac{3}{4}((a-4)^2 - 16) \\
 &= -\frac{3}{4}(a-4)^2 + 12 \\
 \text{max of } 12 & \quad \checkmark \bullet 6 \\
 \text{when } a = 4 & \quad \checkmark \bullet 7
 \end{aligned}$$

example of a proof

$\cos P = \frac{8}{10} = \frac{a}{l} \Rightarrow l = \frac{10}{8}a = \frac{5}{4}a$
 $\sin P = \frac{6}{10} = \frac{b}{8-a} \Rightarrow b = \frac{6}{10}(8-a)$
 $\text{Area} = lb = \frac{5}{4}a \times \frac{6}{10}(8-a) = \frac{3}{4}a(8-a)$

Give 1 mark for each • Illustrations of evidence for awarding each •
for the Mathematics with Statistics paper Replacing Maths qu 2, (6 &7), & 8.

- 2 A TV football commentator claims that “you can’t gain points without scoring goals”.
 A football coach disagrees with this statement as he believes in solid defensive play. He is convinced there is no relationship between the number of goals scored by a team and the number of points they gain.
- To test the football coach’s claim, a random sample of 8 teams was selected from a football league. The number of points gained (y) was plotted against the number of goals scored (x) and the result is shown on the scattergraph.
- Given that $\Sigma x = 343$, $\Sigma y = 260$, $\Sigma x^2 = 17863$, $\Sigma y^2 = 10686$ and $\Sigma xy = 13736$, calculate the product moment correlation coefficient and comment on the football coach’s claim that there is no relationship between the number of goals scored and the number of points gained. 5
- 7 A restaurant caters for both vegetarian and non-vegetarian customers. It is found that the probability of a customer ordering a vegetarian meal is $\frac{2}{5}$.
- All meals are classified only as vegetarian or non-vegetarian. Assuming that orders for meals are independent, calculate the probability that, on a particular day,
- (a) the first three meals ordered are vegetarian. 2
- (b) that at least one vegetarian meal is ordered in the first five orders. 3
- 8 (a) Show that the expected value of the score when a fair die is rolled is 3.5. 2
- 
- (b) A computer is programmed to simulate the scores when a six-sided die is rolled. It produces results such that one of the scores occurs 25% more often than any other score.
- (i) Find the probability that the computer selects this score. 3
- (ii) The expected value of the score on the simulated die is 3.44. Find which score occurs 25% more often than any other. 3

<p>3</p>	<p>Give 1 mark for each •</p> <p>4.4.4 C C 02/S18</p> <p>ans : $r = 0.9743$, strong +ve correlation</p> <p>5 marks</p> <ul style="list-style-type: none"> •¹ pd : process S_{xy} •² pd : process S_{xx} •³ pd : process S_{yy} •⁴ pd : process corr. coefficient •⁵ ic : comment on value of corr. coeff 	<p>Illustrations of evidence for awarding each •</p> <ul style="list-style-type: none"> •¹ $S_{xy} = 2588.5$ pd •² $S_{xx} = 3156.875$ pd •³ $S_{yy} = 2236$ pd •⁴ $r = 0.9743$ pd •⁵ strong + ve correlation or coach is wrong or relationship exists between ic <p>Notes</p> <ul style="list-style-type: none"> 1 Penalise once for premature rounding. 2 Wrong answers like $r = 0.2$ suggest no relationship 														
<p>6/7</p> <p>a</p> <p>b</p>	<p>4.2.10 C C/A 02/S8</p> <p>ans : $\frac{8}{125}$ 2 marks</p> <p>ans : $\frac{2882}{3125}$ 3 marks</p> <ul style="list-style-type: none"> •¹ ss : know how to find P(indep. events) •² pd : process probability •³ ss : know how to deal with 'at least one' •⁴ ss : know to deal with 'five orders' •⁵ pd : process result 	<ul style="list-style-type: none"> •¹ $P(VVV) = (P(V))^3$ ss •² $\frac{8}{125} (0.064)$ pd •³ $P(N) = \frac{3}{5}$ ss •⁴ $1 - (P(N))^5$ ss •⁵ $\frac{2882}{3125} (0.92)$ pd <p>Notes</p> <ul style="list-style-type: none"> 1 $\frac{2}{5} \cdot (\frac{3}{5})^4 = \frac{162}{3125}$ may be awarded 1 mark. 														
<p>8</p> <p>a</p> <p>b</p>	<p>4.2.11, 12 C C/AB 02/S6</p> <p>ans : proof 2 marks</p> <p>ans : (i) 0.2 3 marks</p> <p>(ii) 2 3 marks</p> <ul style="list-style-type: none"> •¹ ss : table of scores/probabilities •² ic : complete proof •³ ss : know that $\sum p_i = 1$ •⁴ pd : process •⁵ pd : process •⁶ ss : set up equation or start trial & error •⁷ pd : process •⁸ pd : process <p>alternative for (bii)</p> <p>fall in E(X) is 0.06</p> <p>P for all other numbers falls by $\frac{1}{6} - 0.16$</p> <p>P(a) then rises by $0.2 - 0.16$</p> <p>$(1 + 2 + \dots + 6) \times (\frac{1}{6} - 0.16) - 0.04a = 0.06$</p> <p>$21 \times 0.04 - 0.24a = 0.36$</p> <p>$a = 2$</p>	<ul style="list-style-type: none"> •¹ <table style="display: inline-table; vertical-align: middle;"> <tr> <td style="padding-right: 10px;">x</td> <td>1</td> <td>2</td> <td>3</td> <td>4</td> <td>5</td> <td>6</td> </tr> <tr> <td>$P(X=x)$</td> <td>$\frac{1}{6}$</td> <td>$\frac{1}{6}$</td> <td>$\frac{1}{6}$</td> <td>$\frac{1}{6}$</td> <td>$\frac{1}{6}$</td> <td>$\frac{1}{6}$</td> </tr> </table> ss •² $E(X) = \frac{1}{6}(1+2+3+4+5+6)$ ic •³ $5 \times p_{fair} + 1 \times (p_{fair} + \frac{1}{4} p_{fair}) = 1$ ss •⁴ $P(\text{fair number}) = 0.16$ pd •⁵ $P(\text{loaded number}) = 0.2$ pd let a be loaded number •⁶ $a \times 0.2 + (1 + \dots + 6 \text{ less } a) \times 0.16 = 3.44$ ss •⁷ $0.2a + (21 - a) \times 0.16 = 3.44$ pd $0.04a + 3.36 = 3.44$ •⁸ $a = 2$ pd <p>Notes</p> <ul style="list-style-type: none"> 1 For (a), $\frac{1+2+3+4+5+6}{6} = 3.5$ earns only 1 mark 	x	1	2	3	4	5	6	$P(X=x)$	$\frac{1}{6}$	$\frac{1}{6}$	$\frac{1}{6}$	$\frac{1}{6}$	$\frac{1}{6}$	$\frac{1}{6}$
x	1	2	3	4	5	6										
$P(X=x)$	$\frac{1}{6}$	$\frac{1}{6}$	$\frac{1}{6}$	$\frac{1}{6}$	$\frac{1}{6}$	$\frac{1}{6}$										