



2009 Mathematics
Higher – Paper 1 and Paper 2
Finalised Marking Instructions

© Scottish Qualifications Authority 2009

The information in this publication may be reproduced to support SQA qualifications only on a non-commercial basis. If it is to be used for any other purposes written permission must be obtained from the Question Paper Operations Team, Dalkeith.

Where the publication includes materials from sources other than SQA (secondary copyright), this material should only be reproduced for the purposes of examination or assessment. If it needs to be reproduced for any other purpose it is the centre's responsibility to obtain the necessary copyright clearance. SQA's Question Paper Operations Team at Dalkeith may be able to direct you to the secondary sources.

These Marking Instructions have been prepared by Examination Teams for use by SQA Appointed Markers when marking External Course Assessments. This publication must not be reproduced for commercial or trade purposes.

General Comments

These marking instructions are for use with the 2009 Higher Mathematics Examination.

For each question the marking instructions are split into two sections, namely the Generic Marking Instructions and the Specific Marking Instructions. The Generic Marking Instructions indicate what evidence must be seen for each mark to be awarded. The Specific Marking Instructions cover the most common methods you are likely to see throughout your marking.

Below these two sections there may be comments, less common methods and common errors.

In general you should use the Specific Marking Instructions together with the comments, less common methods and common errors; only use the Generic Marking Instructions where the candidate has used a method not otherwise covered.

All markers should apply the following general marking principles throughout their marking:

- 1 Marks must be assigned in accordance with these marking instructions. In principle, marks are awarded for what is correct, rather than marks deducted for what is wrong.
- 2 Award one mark for each ‘bullet’ point. Each error should be underlined in RED at the point in the working where it first occurs, and not at any subsequent stage of the working.
- 3 The working subsequent to an error must be followed through by the marker with possible full marks for the subsequent working, provided that the difficulty involved is approximately similar. Where, subsequent to an error, the working is eased, a deduction(s) of mark(s) should be made. This may happen where a question is divided into parts. In fact, failure to even answer an earlier section does not preclude a candidate from assuming the result of that section and obtaining full marks for a later section.
- 4

Tick	✓	Cross	✗	Cross-Tick	✗	Double Cross-Tick	✗
------	---	-------	---	------------	---	-------------------	---

Correct working should be ticked. This is essential for later stages of the SQA procedures. Where an error occurs, this should be underlined and marked with a cross at the end of the line. Where working subsequent to an error(s) is correct and scores marks, it should be marked with a crossed tick.

In appropriate cases attention may be directed to work which is not quite correct (e.g. bad form) but which has not been penalised, by underlining with a dotted (or wavy) line.

Work which is correct but inadequate to score any marks should be corrected with a double cross tick.
- 5 The total mark for each section of a question should be entered in **red** in the **outer** right hand margin, opposite the end of the working concerned.
 - Only the mark should be written, not a fraction of the possible marks.
 - These marks should correspond to those on the question paper and these instructions.
- 6 Where a candidate has scored zero marks for any question attempted, “0” should be shown against the answer.
- 7 As indicated on the front of the question paper, full credit should only be given where the solution contains appropriate working. Throughout this paper, unless specifically mentioned in the marking scheme, a correct answer with no working receives no credit.

- 8 There is no such thing as a transcription error, a trivial error, a casual error or an insignificant error – each one is simply an error. In general, as a consequence of one of these errors, candidates lose the opportunity of gaining the appropriate *ic* or *pd* mark.
- 9 Normally, do not penalise:
- working subsequent to a correct answer
 - omission of units
 - legitimate variations in numerical answers
 - bad form
 - correct working in the “wrong” part of a question
- unless specifically mentioned in the marking scheme.
- 10 No piece of work should be ignored without careful checking - even where a fundamental misunderstanding is apparent early in the answer. Reference should always be made to the marking scheme. Answers which are widely off-beam are unlikely to include anything of relevance but in the vast majority of cases candidates still have the opportunity of gaining the odd mark or two provided it satisfies the criteria for the mark(s).
- 11 If in doubt between two marks, give an intermediate mark, but without fractions. When in doubt between consecutive numbers, give the higher mark.
- 12 In cases of difficulty covered neither in detail nor in principle in the Instructions, attention may be directed to the assessment of particular answers by making a referral to the P.A. Please see the general instructions for P.A. referrals.
- 13 No marks should be deducted at this stage for careless or badly arranged work. In cases where the writing or arrangement is very bad, a note may be made on the upper left-hand corner of the front cover of the script.
- 14 It is of great importance that the utmost care should be exercised in adding up the marks. Using the Electronic Marks Capture (EMC) screen to tally marks for you is **NOT** recommended. A manual check of the total, using the grid issued with this marking scheme, can be confirmed by the EMC system.
- 15 Provided that it has not been replaced by another attempt at a solution, working that has been crossed out by the candidate should be marked in the normal way. If you feel that a candidate has been disadvantaged by this action, make a P.A. Referral.
- 16 **Do not write any comments, words or acronyms on the scripts.**
A revised summary of acceptable notation is given on page 4.
- 17 **Summary**
Throughout the examination procedures many scripts are remarked. It is essential that markers follow common procedures:
- 1 Tick correct working.
 - 2 Put a mark in the outer right-hand margin to match the marks allocations on the question paper.
 - 3 Do not write marks as fractions.
 - 4 Put each mark at the end of the candidate’s response to the question.
 - 5 Follow through errors to see if candidates can score marks subsequent to the error.
 - 6 Do not write any comments on the scripts.

Higher Mathematics : A Guide to Standard Signs and Abbreviations

Remember - No comments on the scripts. Please use the following and nothing else.

Signs	Comments	Examples	Margins
✓	The tick. You are not expected to tick every line but you must check through the whole of a response.	$\frac{dy}{dx} = 4x - 7$ ✓ •	
<u> </u> X	The cross and underline. Underline an error and place a cross at the end of the line.	$4x - 7 \equiv 0$ X	
✓X	The tick-cross. Use this to show correct work where you are following through subsequent to an error.	$x = \frac{7}{4}$ $y = 3\frac{7}{8}$ ✓X •	2
		$C = (1, -1)$ X	
		$m = \frac{3 - (-1)}{4 - 1}$ $m_{rad} = \frac{4}{3}$ ✓X •	
		$m_{tgt} = \frac{-1}{\frac{4}{3}}$ $m_{tgt} = -\frac{3}{4}$ ✓X •	3
		$y - 3 = -\frac{3}{4}(x - 2)$ ✓X •	
∧	The roof. Use this to show something is missing such as a crucial step in a proof or a 'condition' etc.	$x^2 - 3x = 28$ ✓ • ∧	
✕✕	The double cross-tick. Use this to show correct work but which is inadequate to score any marks. This may happen when working has been eased.	$x = 7$ ✕✕	1
~	Tilde. Use this to indicate a minor transgression which is not being penalised (such as bad form).	$\sin(x) = 0.75$ $= \text{inv sin}(0.75)$ ~ $= 48.6^\circ$ ✓ •	1
↓	If a solution continues later on, put an arrow in the marks margin to show this. The mark given should appear at the end.	$x^3 - 4x^2 + 8x - 5 = 0$ $(x-1)(x^2 - 3x + 5) = 0$?	↓

Bullets showing where marks are being allocated may be shown on scripts.

Please use the above and nothing else. All of these are to help us be more consistent and accurate.

Page 5 lists the syllabus coding for each topic. This information is given in the legend above the question. The calculator classification is CN(calculator neutral), CR(calculator required) and NC(non-calculator).

Syllabus Coding by Topic

Unit 1	Unit 2	Unit 3
A1 determine range/domain	A15 use the general equation of a parabola	A28 use the laws of logs to simplify/find equiv. expression
A2 recognise general features of graphs: poly, exp, log	A16 solve a quadratic inequality	A29 sketch associated graphs
A3 sketch and annotate related functions	A17 find nature of roots of a quadratic	A30 solve eqns of the form $A = Be^{kt}$ for A, B, k or t
A4 obtain a formula for composite function	A18 find nature of roots, find a condition on coeffs	A31 solve eqns of the form $\log(a) = c$ for a, b or c
A5 complete the square	A19 form an equation with given roots	A32 solve equations involving logarithms
A6 interpret equations and expressions	A20 apply A15-A19 to solve problems	A33 use relationships of the form $y = ax^n$ or $y = ab^x$
A7 determine function (poly, exp, log) from graph & w		A34 apply A28-A33 to problems
A8 sketch/annotate graph given critical features		
A9 interpret loci such as st. lines, para, poly, circle		
	A21 use Rem. Th. For values, factors, roots	G16 calculate the length of a vector
A10 use the notation u_n for the nth term	A22 solve cubic and quartic equations	G17 calculate the 3rd given two from A, B and vector AB
A11 evaluate successive terms of a RR	A23 find intersection of line and polynomial	G18 use unit vectors
A12 decide when RR has limit/interpret limit	A24 find if line is tangent to polynomial	G19 use: if u, v are parallel, then $v = ku$
A13 evaluate limit	A25 find intersection of two polynomials	G20 add, subtract, find scalar mult. of vectors
A14 apply A10-A14 to problems	A26 confirm and improve on approx roots	G21 simplify vector pathways
	A27 apply A21-A26 to problems	G22 interpret 2D sketches of 3D situations
		G23 find if 3 points in space are collinear
G1 use the distance formula	G9 find C/R of a circle from its equation/other data	G24 find ratio which one point divides two others
G2 find gradient from 2 pts./angle/equ. of line	G10 find the equation of a circle	G25 given a ratio, find/interpret 3rd point/vector
G3 find equation of a line	G11 find equation of a tangent to a circle	G26 calculate the scalar product
G4 interpret all equations of a line	G12 find intersection of line & circle	G27 use: if u, v are perpendicular then $v \cdot u = 0$
G5 use property of perpendicular lines	G13 find if/when line is tangent to circle	G28 calculate the angle between two vectors
G6 calculate mid-point	G14 find if two circles touch	G29 use the distributive law
G7 find equation of median, altitude, perp. bisector	G15 apply G9-G14 to problems	G30 apply G16-G29 to problems eg geometry probs.
G8 apply G1-G7 to problems eg intersect, concur, collin.		
C1 differentiate sums, differences	C12 find integrals of px^2 and sums/diffs	C20 differentiate $\sin(ax+b)$, $\cos(ax+b)$
C2 differentiate negative & fractional powers	C13 integrate with negative & fractional powers	C21 differentiate using the chain rule
C3 express in differentiable form and differentiate	C14 express in integrable form and integrate	C22 integrate $(ax + b)^n$
C4 find gradient at point on curve & w	C15 evaluate definite integrals	C23 integrate $\sin(ax+b)$, $\cos(ax+b)$
C5 find equation of tangent to a polynomial/trig curve	C16 find area between curve and x-axis	C24 apply C20-C23 to problems
C6 find rate of change	C17 find area between two curves	
C7 find when curve strictly increasing etc	C18 solve differential equations (variables separable)	
C8 find stationary points/values	C19 apply C12-C18 to problems	
C9 determine nature of stationary points		
C10 sketch curve given the equation		
C11 apply C1-C10 to problems eg optimise, greatest/least		
T1 use gen. features of graphs of $f(x) = k \sin(ax+b)$, $f(x) = k \cos(ax+b)$; identify period/amplitude	T7 solve linear & quadratic equations in radians	T12 solve sim. eqns of form $k \cos(a) = p$, $k \sin(a) = q$
T2 use radians inc conversion from degrees & w	T8 apply compound and double angle (c & da) formulae in numerical & literal cases	T13 express $\cos(x) + \sin(x)$ in form $k \cos(x \pm a)$ etc
T3 know and use exact values	T9 apply c & da formulae in geometrical cases	T14 find max/min/zeros of $\cos(x) + \sin(x)$
T4 recognise forms of trig. function from graph	T10 use c & da formulae when solving equations	T15 sketch graph of $y = \cos(x) + \sin(x)$
T5 interpret trig. equations and expressions	T11 apply T7-T10 to problems	T16 solve eqn of the form $y = p \cos(rx) + q \sin(rx)$
T6 apply T1-T5 to problems		T17 apply T12-T16 to problems

Higher Mathematics 2009 v10

For information only

Paper 1 Section A qu.1-10

Qu.	Key	Item no.	solution
1.01	A	999	<ul style="list-style-type: none"> $u_2 = 3 \times 2 + 4 = 10$ $\therefore u_3 = 3 \times 10 + 4 = 34$
1.02	B	153	$x^2 + y^2 + 8x + 6y - 75 = 0$ <ul style="list-style-type: none"> $r = \sqrt{(-4)^2 + (-3)^2 - (-75)}$ $r = 10$
1.03	D	950	<ul style="list-style-type: none"> $S = \left(\frac{-1+3}{2}, \frac{4+6}{2} \right) = (1, 5)$ $m_{PS} = \frac{5-2}{1-3} = \frac{7}{4}$
1.04	C	60	<ul style="list-style-type: none"> $\frac{dy}{dx} = 15x^2 - 12$ at $x = 1$, gradient = $15 - 12 = 3$
1.05	B	1201	<ul style="list-style-type: none"> $ST = \sqrt{(2-5)^2 + (3-(-1))^2}$ $ST = 5$ $m_{ST} = \frac{3-(-1)}{2-5} = -\frac{4}{3}$
1.06	A	1239	<ul style="list-style-type: none"> $L = 0.7L + 10$ $L = \frac{10}{0.3} = \frac{100}{3}$
1.07	A	63	<ul style="list-style-type: none"> $\cos(2x) = 2\cos^2(x) - 1$ $2 \times \left(\frac{1}{\sqrt{5}} \right)^2 - 1 = -\frac{3}{5}$
1.08	D	1081	<ul style="list-style-type: none"> $f(x) = \frac{1}{4}x^{-3}$ $f'(x) = -\frac{3}{4}x^{-4}$
1.09	A	1901	<ul style="list-style-type: none"> $x^2 + (2x)^2 = 5$ $5x^2 = 5, x = \pm 1$
1.10	B	1903	<ul style="list-style-type: none"> $x = 3, y = \log(3-2) = 0$ so B $x = 7, y = \log_5(7-2) = 1$

Paper 1 Section A qu.11-20

Qu.	Key	Item no.	solution
1.11	B	1145	<ul style="list-style-type: none"> $\sin x = \frac{\sqrt{5}}{4} : 2 \text{ solutions}$ $\sin x = -1 : 1 \text{ solution}$
1.12	C	1313	<ul style="list-style-type: none"> $b^2 - 4ac = 73 > 0$ roots are real and distinct
1.13	B	1146	<ul style="list-style-type: none"> $\tan a^\circ = \frac{1}{\sqrt{3}}$ so $a = 30$ $k^2 = 1 + 3$ so $k = 2$
1.14	C	1172	<ul style="list-style-type: none"> $f_{\max} = 2 \times 1 + 5 = 7$ $f_{\min} = 2 \times (-1) + 5 = 3$
1.15	A	1396	<ul style="list-style-type: none"> angle at x-axis = $\frac{\pi}{3}$ $m_{GH} = \tan \frac{\pi}{3} = \sqrt{3}$
1.16	B	1148	<ul style="list-style-type: none"> integrate: $x^4 - 3x^3$ limits: $-[\dots]_0^1$
1.17	A	1133	<ul style="list-style-type: none"> $u = \sqrt{(-3)^2 + 4^2} = 5$ a unit vector: $\frac{1}{5}(-3i + 4j)$
1.18	D	394	<ul style="list-style-type: none"> $-\frac{1}{2}(4 - 3x^2)^{-\frac{3}{2}}$ multiplied by $-6x$
1.19	C	1002	<ul style="list-style-type: none"> $(2+x)(3-x) < 0$ solution is either $-2 < x < 3$ or $x < -2, x > 3$ $x = 0$ is FALSE so $x < -2$ and $x > 3$
1.20	C	161	<ul style="list-style-type: none"> $\frac{dA}{dr} = 4\pi r + 6\pi$ $\frac{dA}{dr}_{r=2} = 8\pi + 6\pi = 14\pi$

qu		Mark	Code	Cal	Source	ss	pd	ic	C	B	A		U1	U2	U3	1.21
1.21	a	1	G4	cn	09013			1					1			
	b	3	G7	cn		1	1	1	3				3			
	c	4	G8	cn		1	2	1	4				4			

Triangle PQR has vertex P on the x-axis.
 Q and R are the points (4, 6) and (8, -2) respectively.
 The equation of PQ is $6x - 7y + 18 = 0$.

(a) State the coordinates of P 1

(b) Find the equation of the altitude of the triangle from P. 3

(c) The altitude from P meets the line QR at T. Find the coordinates of T. 4

The primary method m.s. is based on the following generic m.s.
 This generic marking scheme may be used as an equivalence guide but only where a candidate does not use the primary method or any alternative method shown in detail in the marking scheme.

• ¹	ic	interpret x -intercept	
• ²	pd	find gradient (of QR)	
• ³	ss	know and use $m_1 m_2 = -1$	
• ⁴	ic	state equ. of altitude	
• ⁵	ic	state equ. of line (QR)	
• ⁶	ss	prepare to solve sim. equ.	
• ⁷	pd	solve for x	
• ⁸	pd	solve for y	

Primary Method : Give 1 mark for each •

•¹ $P = (-3, 0)$ see Notes 1, 2

•² $m_{QR} = -2$ or equivalent

•³ $m_{alt} = \frac{1}{2}$ s / i by •⁴

•⁴ $alt : y - 0 = \frac{1}{2}(x + 3)$ see Note 4

•⁵ $QR : y + 2 = -2(x - 8)$ or $y - 6 = -2(x - 4)$

•⁶ e.g. $x - 2y = -3$ and $2x + y = 14$ see Note 5 & Options

•⁷ $x = 5$

•⁸ $y = 4$

<p>Notes</p> <ol style="list-style-type: none"> Without any working; accept $(-3, 0)$ accept $x = -3, y = 0$ accept $x = -3$ and $y = 0$ appearing at •⁴. $x = -3$ appearing as a consequence of substituting $y = 0$ may be awarded •¹. At •³, whatever perpendicular gradient is found, it must be in its simplest form either at •³ or •⁴. •⁴ is only available as a consequence of attempting to find and use a perpendicular gradient together with whatever coordinates they have for P. 	<p>Notes cont</p> <ol style="list-style-type: none"> •⁶, •⁷ and •⁸ are only available for attempting to solve equations for PT and QR. •⁶ is a strategy mark for juxtaposing two correctly rearranged equations. Equating zeroes does not gain •⁶. The answers for •⁷ and •⁸ must be of the form of a mixed number or a fraction (vulgar or decimal). <p>Common Errors</p> <p>•² X $m_{QR} = \dots = -1$</p> <p>•³ X $\checkmark m_{\perp} = 1$</p> <p>•⁴ X $\checkmark y - 0 = 1(x + 3)$</p>	<p>Option 1 for •⁵ to •⁸ :</p> <p>•⁵ $QR : y + 2 = -2(x - 8)$</p> <p>•⁶ $\frac{1}{2}(x + 3) = -2(x - 8) - 2$</p> <p>•⁷ $x = 5$</p> <p>•⁸ $y = 4$</p> <p>Option 2 for •⁵ to •⁸ :</p> <p>•⁵ $QR : y - 6 = -2(x - 4)$</p> <p>•⁶ $\frac{1}{2}(x + 3) = -2(x - 4) + 6$</p> <p>•⁷ $x = 5$</p> <p>•⁸ $y = 4$</p>
---	---	---

qu		Mk	Code	cal	Source	ss	pd	ic	C	B	A		U1	U2	U3	1.22
1.22	a	4	G23, 24	cn	09005	1		3	4						4	
	b	4	G27	cn		2	2		4						4	

<p>D, E and F have coordinates (10, -8, -15), (1, -2, -3) and (-2, 0, 1) respectively.</p> <p>(a) (i) Show that D, E and F are collinear. (ii) Find the ratio in which E divides DF.</p> <p>(b) G has coordinates (k, 1, 0). Given that DE is perpendicular to GE, find the value of k.</p>	<p>4</p> <p>4</p>
---	-------------------

The primary method m.s. is based on the following generic m.s.
 This generic marking scheme may be used as an equivalence guide but only where a candidate does not use the primary method or any alternative method shown in detail in the marking scheme.

In this question expressing vectors as coordinates and vice versa is treated as bad form - do not penalise.

- ¹ ss use vector approach
- ² ic compare two vectors
- ³ ic complete proof
- ⁴ ic state ratio
- ⁵ ss use vector approach
- ⁶ ss know scalar product = 0 for \perp vectors
- ⁷ pd start to solve
- ⁸ pd complete

Primary Method : Give 1 mark for each •

- ¹ $\overrightarrow{DE} = \begin{pmatrix} -9 \\ 6 \\ 12 \end{pmatrix}$ or $\overrightarrow{EF} = \begin{pmatrix} -3 \\ 2 \\ 4 \end{pmatrix}$ see Note 1
- ² 2nd column vector **and** $\overrightarrow{DE} = 3\overrightarrow{EF}$ (or equiv.)
- ³ \overrightarrow{DE} and \overrightarrow{EF} have common point and common direction
 hence D, E and F collinear see Note 2
- ⁴ 3 : 1 **stated explicitly**
- ⁵ $\overrightarrow{GE} = \begin{pmatrix} 1-k \\ -3 \\ -3 \end{pmatrix}$
- ⁶ $\overrightarrow{DE} \cdot \overrightarrow{GE} = 0$ s / i by •⁷
- ⁷ $-9(1-k) + 6 \times (-3) + 12 \times (-3)$
- ⁸ $k = 7$

Notes

- \overrightarrow{DE} & \overrightarrow{DF} or \overrightarrow{EF} & \overrightarrow{DF} are alternatives to \overrightarrow{DE} & \overrightarrow{EF} .
- ³ can **only** be awarded if a candidate has stated
 * "common point",
 * "common direction" (or "parallel")
 * and "collinear"
- The "=0" shown at •⁶ must appear somewhere before •⁸.
- In (b) "G.E" = $\begin{pmatrix} k \\ 1 \\ 0 \end{pmatrix} \cdot \begin{pmatrix} 1 \\ -2 \\ -3 \end{pmatrix} = 0$ leading to $k = 2$, award 1 mark.
- If **a** and **b** are not defined, then merely quoting $\mathbf{a} \cdot \mathbf{b} = 0$ does not gain •⁶.

Common Error 1 for (b)

- ⁵ \checkmark $\overrightarrow{GE} = \begin{pmatrix} 1-k \\ -3 \\ -3 \end{pmatrix}$
- ⁶ X $\overrightarrow{DE} \cdot \overrightarrow{GE} = -1$
- ⁷ X \checkmark $-9(1-k) + 6 \times (-3) + 12 \times (-3) = -1$
- ⁸ X \checkmark $k = \frac{64}{9}$

Common Error 2 for (b)

- ⁵ X $\begin{pmatrix} k \\ 1 \\ 0 \end{pmatrix}$
- ⁶ X \checkmark $\begin{pmatrix} k \\ 1 \\ 0 \end{pmatrix} \cdot \begin{pmatrix} -9 \\ 6 \\ 12 \end{pmatrix} = 0$
- X \checkmark $k = \frac{2}{3}$ i.e. 2 marks

Common Error 3 for (b)

- ⁵ X $\begin{pmatrix} k \\ 1 \\ 0 \end{pmatrix}$
- ⁶ X $\begin{pmatrix} k \\ 1 \\ 0 \end{pmatrix} \cdot \begin{pmatrix} -9 \\ 6 \\ 12 \end{pmatrix} = -1$
- X \checkmark $k = \frac{7}{9}$ i.e. 1 mark

Options for •¹ to •³:

1

- ¹ $\overrightarrow{DE} = \begin{pmatrix} -9 \\ 6 \\ 12 \end{pmatrix}$ •² $\overrightarrow{DF} = \begin{pmatrix} -12 \\ 8 \\ 16 \end{pmatrix} = \frac{4}{3} \overrightarrow{DE}$
- ³ \overrightarrow{DE} and \overrightarrow{DF} have common point and common direction
 hence D, E and F collinear

2

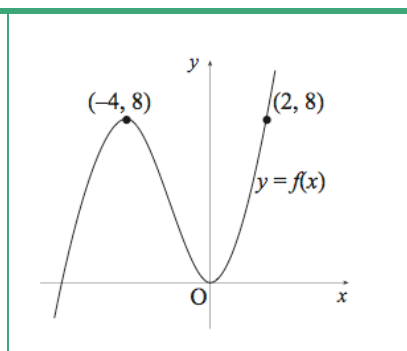
- ¹ $\overrightarrow{EF} = \begin{pmatrix} -3 \\ 2 \\ 4 \end{pmatrix}$ •² $\overrightarrow{DF} = \begin{pmatrix} -12 \\ 8 \\ 16 \end{pmatrix} = 4\overrightarrow{EF}$
- ³ \overrightarrow{EF} and \overrightarrow{DF} have common point and common direction
 hence D, E and F collinear

qu		Mk	Code	cal	Source	ss	pd	ic	C	B	A		U1	U2	U3	1.23
1.23	a	2	A3	cn	09016			2		2			2			
	b	3	A3	cn		1		2		3			3			

The diagram shows a sketch of the function $y = f(x)$.

(a) Copy the diagram and on it sketch the graph of $y = f(2x)$. 2

(b) On a separate diagram sketch the graph of $y = 1 - f(2x)$. 3



The primary method m.s. is based on the following generic m.s.

This generic marking scheme may be used as an equivalence guide but only where a candidate does not use the primary method or any alternative method shown in detail in the marking scheme.

- ¹ ic scaling parallel to x -axis
- ² ic annotate graph
- ³ ss correct order for refl(x) & trans
- ⁴ ic start to annotate final sketch
- ⁵ ic complete annotation

Primary Method : Give 1 mark for each

3 points : the origin, (1, 8) and (-2, 8)

- ¹ sketch and 1 point correct
- ² other two points correct
- ³ reflect in x -axis, then vertical trans. s / i by •⁴

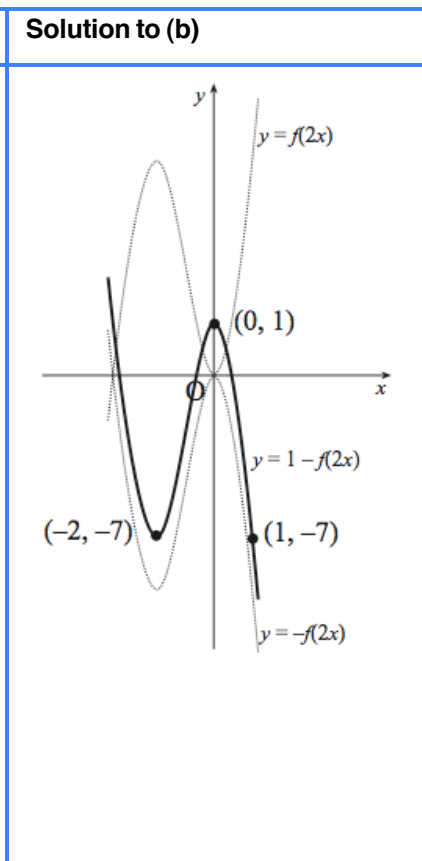
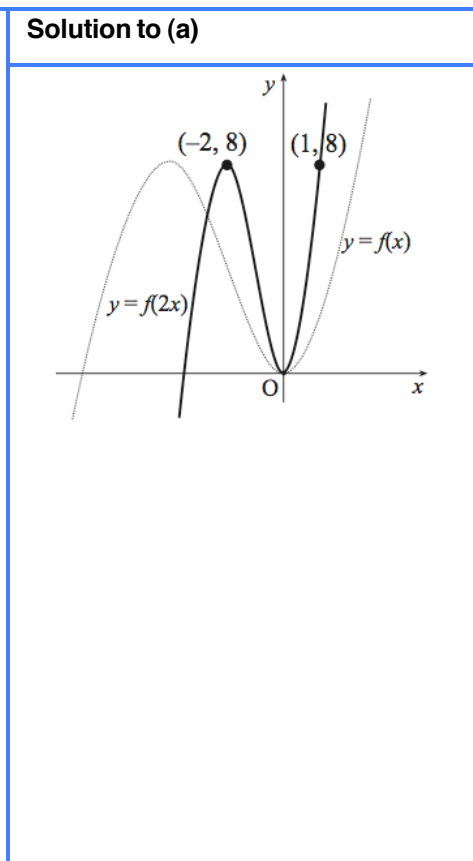
final points : (0, 1), (1, -7) and (-2, -7)

- ⁴ sketch and 1 final point correct
- ⁵ the other two final points correct

Notes

- In (a) sketching $y = f(\frac{1}{2}x)$ loses •¹ but may gain •² with appropriate annotation.
- In (a) no marks are awarded for any other function.
- Do not penalise omission of the original function in the candidate's sketch for (a).
- In (b)

X refl	X refl	$\sqrt{}$ refl	$\sqrt{}$ refl
$\sqrt{}$ trans	X trans	X trans	X trans
		$\begin{pmatrix} 0 \\ -1 \end{pmatrix}$	$\begin{pmatrix} \pm 1 \\ 0 \end{pmatrix}$
max	1	0	2
- In (b): if a candidate does not use their solution for $y = f(2x)$, a maximum of two marks may be awarded for a "correct" solution.
- In (b): No marks are available in (b) unless **both** a reflection and a translation have been carried out.



Higher Mathematics 2009 v10

qu		Mk	Code	Ca1	Source	ss	pd	ic	C	B	A		U1	U2	U3	1.24
1.24	a	3	T8, T3	nc	09002	1	1	1	3						3	
	b	2	T8	cn				2	2						2	
	c	4	T11	nc		1	1	2	1	3					4	

<p>(a) Using the fact that $\frac{7\pi}{12} = \frac{\pi}{3} + \frac{\pi}{4}$, find the exact value of $\sin\left(\frac{7\pi}{12}\right)$. 3</p> <p>(b) Show that $\sin(A+B) + \sin(A-B) = 2 \sin A \cos B$. 2</p> <p>(c) (i) Express $\frac{\pi}{12}$ in terms of $\frac{\pi}{3}$ and $\frac{\pi}{4}$.</p> <p style="padding-left: 20px;">(ii) Hence or otherwise find the exact value of $\sin\left(\frac{7\pi}{12}\right) + \sin\left(\frac{\pi}{12}\right)$. 4</p>

<p>The primary method m.s is based on the following generic m.s.</p> <p>This generic marking scheme may be used as an equivalence guide but only where a candidate does not use the primary method or any alternative method shown in detail in the marking scheme.</p> <ul style="list-style-type: none"> •¹ ss expand compound angle •² ic substitute exact values •³ pd process to a single fraction •⁴ ic start proof •⁵ ic complete proof •⁶ ss identify steps •⁷ ic start process (identify 'A' & 'B') •⁸ ic substitute •⁹ pd process 	<p style="text-align: center; margin-top: 0;">Primary Method : Give 1 mark for each •</p> <ul style="list-style-type: none"> •¹ $\sin \frac{\pi}{3} \cos \frac{\pi}{4} + \cos \frac{\pi}{3} \sin \frac{\pi}{4}$ s / i by •² •² $\frac{\sqrt{3}}{2} \times \frac{1}{\sqrt{2}} + \frac{1}{2} \times \frac{1}{\sqrt{2}}$ •³ $\frac{\sqrt{3}+1}{2\sqrt{2}}$ or equivalent •⁴ $\sin A \cos B + \cos A \sin B + \dots$ •⁵ $\dots + \sin A \cos B - \cos A \sin B$ and complete •⁶ $\frac{\pi}{12} = \frac{\pi}{3} - \frac{\pi}{4}$ stated explicitly •⁷ and A is $\frac{\pi}{3}$, B is $\frac{\pi}{4}$ s / i by •⁷ •⁷ $2 \sin \frac{\pi}{3} \cos \frac{\pi}{4}$ •⁸ $2 \times \frac{\sqrt{3}}{2} \times \frac{1}{\sqrt{2}}$ •⁹ $\frac{\sqrt{6}}{2}$ (accept $\sqrt{\frac{3}{2}}$ or $\frac{\sqrt{3}}{\sqrt{2}}$ but not $\frac{2\sqrt{3}}{2\sqrt{2}}$)
---	--

<p>Notes</p> <p>1. Candidates who work throughout in degrees can gain all the marks.</p> <p>2. In (a) $\sin\left(\frac{\pi}{3} + \frac{\pi}{4}\right) = \sin\left(\frac{\pi}{3}\right) + \sin\left(\frac{\pi}{4}\right)$ etc cannot be awarded any marks. i.e. •¹, •² and •³ are not available.</p> <p>3. In (b), candidates who use numerical values for A and B earn no marks.</p> <p>4. In (c) $\sin\left(\frac{\pi}{3} - \frac{\pi}{4}\right) = \sin\left(\frac{\pi}{3}\right) - \sin\left(\frac{\pi}{4}\right)$ etc cannot be awarded any marks. i.e. •⁷, •⁸ and •⁹ are not available.</p>	<p>Common Errors</p> <p>1. $\frac{7\pi}{12} = \frac{\pi}{3} + \frac{\pi}{4}$ $\therefore \frac{\pi}{12} = \frac{1}{7}\left(\frac{\pi}{3} + \frac{\pi}{4}\right)$ does not gain •⁶.</p>	<p>Alternatives</p> <p>1. for •⁶ to •⁸</p> <ul style="list-style-type: none"> •⁶ $\sin\left(\frac{\pi}{12}\right) = \sin \frac{\pi}{3} \cos \frac{\pi}{4} - \cos \frac{\pi}{3} \sin \frac{\pi}{4}$ •⁷ $\frac{\sqrt{3}}{2} \times \frac{1}{\sqrt{2}} - \frac{1}{2} \times \frac{1}{\sqrt{2}}$ •⁸ $\frac{\sqrt{3}-1}{2\sqrt{2}}$ or equivalent
--	---	--

qu		Mk	Code	cal	Source	ss	pd	ic	C	B	A		U1	U2	U3
2.01		8	C8,C9	cn	08507	3	4	1	8				8		

Find the coordinates of the turning points of the curve with equation $y = x^3 - 3x^2 - 9x + 12$ and determine their nature. 8

The primary method m.s is based on the following generic m.s.
This generic marking scheme may be used as an equivalence guide but only where a candidate does not use the primary method or any alternative method shown in detail in the marking scheme.

- ¹ ss know to differentiate
- ² pd differentiate
- ³ ss set derivative to zero
- ⁴ pd factorise
- ⁵ pd solve for x
- ⁶ pd evaluate y -coordinates
- ⁷ ss know to, and justify turning points
- ⁸ ic interpret result

Primary Method : Give 1 mark for each •

- ¹ $\frac{dy}{dx} = \dots$ (1 term correct)
- ² $3x^2 - 6x - 9$
- ³ $\frac{dy}{dx} = 0$
- ⁴ $3(x+1)(x-3)$

• ⁵ $x = -1$	• ⁶ $x = 3$
• ⁶ $y = 17$	$y = -15$

• ⁷ x	• ⁸ x
• ⁷ $\frac{dy}{dx}$	$\frac{dy}{dx}$
• ⁸ $\frac{dy}{dx}$	$\frac{dy}{dx}$

Notes

1. The "=0" (shown at •³) *must* occur at least once before •⁵.
2. •⁴ is only available as a consequence of solving $\frac{dy}{dx} = 0$.
3. The nature table must reflect previous working from •⁴.
4. For •⁴, accept $(x+1)(x-3)$.
5. The use of the 2nd derivative is an acceptable strategy.
6. As shown in the Primary Method, (•⁵ and •⁶) and (•⁷ and •⁸) can be marked horizontally or vertically.
7. •¹, •² and •³ are the only marks available to candidates who solve $3x^2 - 6x = 9$.

Notes cont

8. If •⁷ is not awarded, •⁸ is only available as follow-through if there is clear evidence of where the signs at the •⁷ stage have been obtained.
9. For •⁷ and •⁸
The completed nature table is worth 2 marks if correct.
If the labels "x" and/or " $\frac{dy}{dx}$ " are missing from an otherwise correct table then **award 1 mark**.
If the labels "x" and/or " $\frac{dy}{dx}$ " are missing from a table where either •⁷ or •⁸ (vertically) would otherwise have been awarded, then **award 0 marks**.

Alternatives

This would be fairly common:

- ¹ $\sqrt{\frac{dy}{dx}} = \dots$ (1 term correct)
- ² $\sqrt{3x^2 - 6x - 9}$
- ³, •⁴ $\sqrt{\sqrt{(3x-9)(x+1)}} = 0$
or $(3x+3)(x-3) = 0$

Min. requirements of a nature table

x	• ⁷ x
$\frac{dy}{dx}$	$\frac{dy}{dx}$
$\frac{dy}{dx}$	$\frac{dy}{dx}$

Preferred nature table

x	• ⁷ x
$\frac{dy}{dx}$	$\frac{dy}{dx}$
$\frac{dy}{dx}$	$\frac{dy}{dx}$

Higher Mathematics 2009 v10

qu		Mk	Code	cal	Source	ss	pd	ic	C	B	A		U1	U2	U3	2.02
2.02	a	3	A4	cn	09011	1		2	3				3			
	b	3	C1	cn		2	1		3				3			

<p>Functions f and g are given by $f(x) = 3x + 1$ and $g(x) = x^2 - 2$.</p> <p>(a) (i) Find $p(x)$ where $p(x) = f(g(x))$</p> <p style="padding-left: 40px;">(ii) Find $q(x)$ where $q(x) = g(f(x))$.</p> <p>(b) Solve $p'(x) = q'(x)$.</p>	<p>3</p> <p>3</p>
--	-------------------

<p>The primary method m.s is based on the following generic m.s.</p> <p>This generic marking scheme may be used as an equivalence guide but only where a candidate does not use the primary method or any alternative method shown in detail in the marking scheme.</p> <ul style="list-style-type: none"> •¹ ss substitute for $g(x)$ in $f(x)$ •² ic complete •³ ic sub. and complete for $q(x)$ •⁴ ss simplify •⁵ pd differentiate •⁶ pd solve 	<p style="text-align: center;">Primary Method : Give 1 mark for each •</p> <ul style="list-style-type: none"> •¹ $f(x^2 - 2)$ s / i by •² •² $3(x^2 - 2) + 1$ •³ $(3x + 1)^2 - 2$ <table style="width: 100%; border-collapse: collapse;"> <tr> <td style="border-right: 1px solid black; padding: 5px;"> <ul style="list-style-type: none"> •⁴ $3x^2 - 5$ •⁵ $6x$ </td> <td style="border-right: 1px solid black; padding: 5px;"> <ul style="list-style-type: none"> •⁵ $9x^2 + 6x - 1$ $18x + 6$ or equiv. </td> <td style="padding: 5px;"> <ul style="list-style-type: none"> •⁶ $x = -\frac{1}{2}$ </td> <td style="padding: 5px; vertical-align: middle;"> <p>s / i by •⁵</p> </td> </tr> </table>	<ul style="list-style-type: none"> •⁴ $3x^2 - 5$ •⁵ $6x$ 	<ul style="list-style-type: none"> •⁵ $9x^2 + 6x - 1$ $18x + 6$ or equiv. 	<ul style="list-style-type: none"> •⁶ $x = -\frac{1}{2}$ 	<p>s / i by •⁵</p>
<ul style="list-style-type: none"> •⁴ $3x^2 - 5$ •⁵ $6x$ 	<ul style="list-style-type: none"> •⁵ $9x^2 + 6x - 1$ $18x + 6$ or equiv. 	<ul style="list-style-type: none"> •⁶ $x = -\frac{1}{2}$ 	<p>s / i by •⁵</p>		

<p>Notes</p> <p>1. In (a) 2 marks are available for finding either $f(g(x))$ or $g(f(x))$ and 1 mark for finding the other.</p> <p>2. In (b) candidates who start by equating $p(x)$ and $q(x)$ and then differentiate may earn •⁴ and •⁶ only.</p>	<p>Common Errors</p> <p>1 $p(x)$ and $q(x)$ switched round:</p> <p>X •¹ $p(x) = g(3x + 1)$</p> <p>$X \checkmark$ •² $p(x) = (3x + 1)^2 - 2$</p> <p>$X \checkmark$ •³ $q(x) = \dots = 3(x^2 - 2) + 1$</p> <p>2 Candidates who find $f(f(x))$ and $g(g(x))$ can earn no marks in (a) but</p> <p>$X \checkmark$ •⁴ $9x + 4$ and $x^4 - 4x^2 + 2$</p> <p>$X \checkmark$ •⁵ $9 = 4x^3 - 8x$</p> <p>XX •⁶ not available</p> <p>3</p> <p>X •⁴ $3x^2 - 1$ and $9x^2 + 6x - 1$</p> <p>$X \checkmark$ •⁵ $6x$ and $18x + 6$</p> <p>$X \checkmark$ •⁶ $x = -\frac{1}{2}$</p>	<p>Alternative for •¹ to •³ :</p> <ul style="list-style-type: none"> •¹ $f(g(x)) = 3 \times g(x) + 1$ •² $f(g(x)) = 3(x^2 - 2) + 1$ $g(f(x)) = (f(x))^2 - 2$ •³ $g(f(x)) = (3x + 1)^2 - 2$
--	--	---

Higher Mathematics 2009 v10

qu	Mk	Code	cal	Source	ss	pd	ic	C	B	A	U1	U2	U3	2.03
2.03	a	4	A21	cn	09008	1	1	2	4			4		
	b	5	A32	cn		2	1	2		5			5	

(a)	(i)	Show that $x = 1$ is a root of $x^3 + 8x^2 + 11x - 20 = 0$.	
	(ii)	Hence factorise $x^3 + 8x^2 + 11x - 20$ fully.	4
(b)		Solve $\log_2(x + 3) + \log_2(x^2 + 5x - 4) = 3$.	5

The primary method m.s is based on the following generic m.s.
 This generic marking scheme may be used as an equivalence guide but only where a candidate does not use the primary method or any alternative method shown in detail in the marking scheme.

• ¹	ss	know and use $f(a) = 0 \Leftrightarrow a$ is a root
• ²	ic	start to find quadratic factor
• ³	ic	complete quadratic factor
• ⁴	pd	factorise fully
• ⁵	ss	use log laws
• ⁶	ss	know to & convert to exponential form
• ⁷	ic	write cubic in standard form
• ⁸	pd	solve cubic
• ⁹	ic	interpret valid solution

Primary Method : Give 1 mark for each •

• ¹	$f(1) = 1 + 8 + 11 - 20 = 0$ so $x = 1$ is a root	See Note 1
• ²	$(x - 1)(x^2 \dots\dots\dots)$	
• ³	$(x^2 + 9x + 20)$	
• ⁴	$(x - 1)(x + 4)(x + 5)$	Stated explicitly
• ⁵	$\log_2((x + 3)(x^2 + 5x - 4))$	s / i by •⁶
• ⁶	$(x + 3)(x^2 + 5x - 4) = 2^3$	
• ⁷	$x^3 + 8x^2 + 11x - 20 = 0$	
• ⁸	$x = 1$ or $x = -4$ or $x = -5$	Stated explicitly here
• ⁹	$x = 1$ only	

Notes

- For candidates evaluating the function, some acknowledgement of the resulting zero must be shown in order to gain •¹.
- For candidates using synthetic division (shown in Alt. box), some acknowledgement of the resulting zero must be shown in order to gain •².
- In option 2 the "zero" has been highlighted by underlining. This can also appear in colour, bold or boxed. Some acknowledgement of the resulting zero must be shown in order to gain •¹ as indicated in each option.

Common Errors

1

•⁵ X $\log_2 \frac{x^2 + 5x - 4}{x + 3} = 3$

•⁶ X ✓ $\frac{x^2 + 5x - 4}{x + 3} = 2^3$

•⁷ X $x^2 - 3x - 28 = 0$

•⁸ X $x = 7$ or -4

•⁹ X ✓ $x = 7$ **ONLY**

Options

Alternative for •¹ to •².

1

1	1	8	11	-20	
	1	9			
1	1	8	11	-20	
1	1	9	20		

•² $\text{rem.} = 0$
 so $x = 1$ is root
see note 2

2

1	1	8	11	-20	
	1	9			
1	1	8	11	-20	
1	1	9	20		

•² $\underline{0}$ so $x = 1$ is root
see note 3

qu		Mk	Code	Cal	Source	ss	pd	ic	C	B	A		U1	U2	U3	2.04
2.04	a	1	A6	cn	08026		1		1				1			
	b	5	G11	cn		2		3	5					5		
	c	4	G15	nc		1	1	2			4			4		

<p>(a) Show that the point P(5, 10) lies on circle C_1 with equation $(x + 1)^2 + (y - 2)^2 = 100$. 1</p> <p>(b) PQ is a diameter of this circle as shown in the diagram. Find the equation of the tangent at Q. 5</p> <p>(c) Two circles, C_2 and C_3, touch circle C_1 at Q. The radius of each of these circles is twice the radius of circle C_1. Find the equations of circles C_2 and C_3. 4</p>	
---	--

<p>The primary method m.s. is based on the following generic m.s. This generic marking scheme may be used as an equivalence but only where a candidate does not use the primary method or alternative method shown in detail in the marking scheme.</p>	<p>Primary Method : Give 1 mark for each •</p> <ul style="list-style-type: none"> •¹ $(5 + 1)^2 + (10 - 2)^2 = 100$ •² $centre = (-1, 2)$ •³ $Q = (-7, -6)$ (no evidence requ.) •⁴ $m_{rad} = \frac{8}{6}$ •⁵ $m_{tgt} = -\frac{3}{4}$ s / i by •⁶ •⁶ $y - (-6) = -\frac{3}{4}(x - (-7))$ •⁷ $radius = 20$ s / i by •⁹ or •¹⁰ •⁸ $centre = (5, 10)$ s / i by •⁹ •⁹ $(x - 5)^2 + (y - 10)^2 = 400$ •¹⁰ $(x + 19)^2 + (y + 22)^2 = 400$
---	--

<p>Notes</p> <ol style="list-style-type: none"> In (a), candidates may choose to show that distance CP = the radius. Markers should note that evidence for •², which is in (b), may appear in (a). The minimum requirement for •¹ is as shown in the Primary Method. •⁶ is only available as a consequence of attempting to find a perp. gradient. For candidates who choose a Q <i>ex nihilo</i>, •⁶ is only available if the chosen Q lies in the 3rd quadrant. 	<p>Notes cont</p> <ol style="list-style-type: none"> •⁹ and/or •¹⁰ are only available as follow-through if a centre with numerical coordinates has been stated explicitly. •¹⁰ is not available as a follow-through; it must be correct. 	<p>Alternative for •⁸, •⁹ and •¹⁰</p> <ul style="list-style-type: none"> •⁸ $centre = (-19, -22)$ s / i by •⁹ •⁹ $(x + 19)^2 + (y + 22)^2 = 400$ •¹⁰ $(x - 5)^2 + (y - 10)^2 = 400$
--	--	--

qu		Mk	Code	Cal	Source	ss	pd	ic	C	B	A		U1	U2	U3	
2.05	a	1	T4	cn	09026			1	1				1			
	b	5	T6	cr		1	3	1	5					5		
	c	6	C17, 23	cr		1	3	2		6				6		

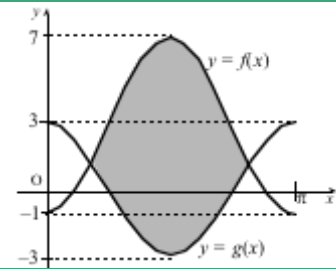
2.05

The graphs of $y = f(x)$ and $y = g(x)$ are shown in the diagram.

$f(x) = -4 \cos(2x) + 3$ and $g(x)$ is of the form $g(x) = m \cos(nx)$.

- (a) Write down the values of m and n .
- (b) Find, correct to 1 decimal place, the coordinates of the points of intersection of the two graphs in the interval shown.
- (c) Calculate the shaded area.

1
5
6



The primary method m.s is based on the following generic m.s.
This generic marking scheme may be used as an equivalence guide but only where a candidate does not use the primary method or any alternative method shown in detail in the marking scheme.

- ¹ ic interprets graph
- ² ss knows how to find intersection
- ³ pd starts to solve
- ⁴ pd finds x -coordinate in the 1st quadrant
- ⁵ pd finds x -coordinate in the 2nd quadrant
- ⁶ pd finds y -coordinates
- ⁷ ss knows how to find area
- ⁸ ic states limits
- ⁹ pd integrate
- ¹⁰ pd integrate
- ¹¹ ic substitute limits
- ¹² pd evaluate area

Continued on next page

Primary Method : Give 1 mark for each •

- ¹ $m = 3$ and $n = 2$
- ² $3 \cos 2x = -4 \cos 2x + 3$
- ³ $\cos 2x = \frac{3}{7}$
- ⁴ $x = 0.6$
- ⁵ $x = 2.6$
- ⁶ $y = 1.3, 1.3$
- ⁷ $\int (-4 \cos 2x + 3 - 3 \cos 2x) dx$
- ⁸ $\int_{0.6}^{2.6}$
- ⁹ " $-7 \sin 2x$ "
- ¹⁰ $3x - \frac{7}{2} \sin 2x$
- ¹¹ $(3 \times 2.6 - \frac{7}{2} \sin 5.2) - (3 \times 0.6 - \frac{7}{2} \sin 1.2)$
- ¹² 12.4

Continued on next page

Question 2.05 cont.

Notes 1

1. Answers which are not rounded should be treated as "bad form" and not penalised.
2. If $n = 1$ from (a), then in (b) the follow-through solution is 0.697 and 5.586.
 •⁵ is not available in (b) and •⁸ is not available in (c).
3. If $n = 3$ from (a), then in (b) only •² is available.
4. At •⁵ :
 $x = 2.5$ can only come from calculating $\pi - 0.6$. For this to be accepted, candidates must state that it comes from symmetry of the graph.
5. For •⁶
 Acceptable values of y will lie in the range 1.1 to 1.6 (due to early rounding !!)
6. Values of x used for the limits must lie between 0 and π ,
 i.e. $0 < \text{limits} < \pi$, else •⁸ is lost.
7. •⁸, •¹¹ and •¹² are not available to candidates who use -3 and 7 as the limits.
8. Candidates must deal appropriately with any extraneous negative signs which may appear before •¹² can be awarded.

It is considered inappropriate to write = -12.4 = 12.4

Common Errors

1. For candidates who work in degrees throughout this question, the following marks are available:

In (b)	In (c)
• ² $\sqrt{\quad}$	• ⁷ $\sqrt{\quad}$
• ³ $\sqrt{\quad}$	• ⁸ X
• ⁴ X	• ⁹ X
• ⁵ $X\sqrt{\quad}$	• ¹⁰ $X\sqrt{\quad}$
• ⁶ $\sqrt{\quad}$	• ¹¹ X
	• ¹² X
2. In (c) candidates who deal with $f(x)$ and $g(x)$ separately and **add** can only earn at most
 - ⁸ correct limits
 - ⁹ for correct integral of $f(x)$
 - ¹⁰ for correct integral of $g(x)$
 - ¹¹ for correct substitution.

Alternative for •³, •⁴, •⁵

Option 1

•³ $\cos^2 x = \frac{10}{14}$
 •⁴ $\cos x = \sqrt{\frac{10}{14}}$, $\cos x = -\sqrt{\frac{10}{14}}$
 •⁵ $x = 0.6$ $x = 2.6$

Option 2

•³ $\cos^2 x = \frac{10}{14}$
 •⁴ $\cos x = \sqrt{\frac{10}{14}}$ and $x = 0.6$
 •⁵ $\cos x = -\sqrt{\frac{10}{14}}$ and $x = 2.6$

Option 3

•³ $\sin^2 x = \frac{4}{14}$
 •⁴ $\sin x = \sqrt{\frac{4}{14}}$
 •⁵ $x = 0.6$, $x = 2.6$

Alternative for •⁹, •¹⁰

•⁹ $-4 \sin 2x - 3 \sin 2x$
 •¹⁰ $3x - \frac{4}{2} \sin 2x - \frac{3}{2} \sin 2x$

Higher Mathematics 2009 v10

qu		Mk	Code	cal	Source	ss	pd	ic	C	B	A		U1	U2	U3	2.06
2.06	a	2	A30, 34	cr	08532		1	1		2					2	
	b	3	A30, 34	cr		1	1	1			3				3	

The size of the human population, N , can be modelled using the equation $N = N_0 e^{rt}$ where N_0 is the population in 2006, t is the time in years since 2006, and r is the annual rate of increase in the population.

- (a) In 2006 the population of the United Kingdom was approximately 61 million, with an annual rate of increase of 1.6%. Assuming this growth rate remains constant, what would be the population in 2020 ? 2
- (b) In 2006 the population of Scotland was approximately 5.1 million, with an annual rate of increase of 0.43%. Assuming this growth rate remains constant, how long would it take for Scotland's population to double in size ? 3

The primary method m.s. is based on the following generic m.s.
 This generic marking scheme may be used as an equivalence guide
 but only where a candidate does not use the primary method or any
 alternative method shown in detail in the marking scheme.

- ¹ ic substitute into equation
- ² pd evaluate exponential expression
- ³ ic interpret info and substitute
- ⁴ ss convert expo. equ. to log. equ.
- ⁵ pd process

Primary Method : Give 1 mark for each •

- ¹ $61e^{0.016 \times 14}$
- ² 76 million *or equiv.*
- ³ $10.2 = 5.1e^{0.0043t}$
- ⁴ $0.0043t = \ln 2$
- ⁵ $t = 161.2$ years

Notes

1. For •², do not accept 76.
Accept any answer which rounds to 76 million and was obtained from legitimate sources.
2. •⁵ is for a rounded up answer or implying a rounded-up answer. Acceptable answers would include 162 and 161.2 but not 161.
3. **Cave**
Beware of poor imitations which yield results similar/same to that given in the paradigm, e.g.
 compound percentage
 or recurrence relations.
 These can receive no credit but see Common Error 2 for exception.

Common Errors

- 1 Candidates who misread the rate of increase:
- ¹ X $61e^{1.6 \times 14}$
 - ² X $\sqrt{3.26 \times 10^{11}}$ million
 - ³ X $\sqrt{10.2 = 5.1e^{0.43t}}$
 - ⁴ X $\sqrt{0.43t = \ln 2}$
 - ⁵ X $\sqrt{t = 1.612}$
- 2
- ¹ X 61×1.016^{14}
 - ² X 76 million
 - ³ X $10.2 = 5.1 \times 1.0043^t$
 - ⁴ X $\sqrt{t \ln 1.0043 = \ln 2}$
 - ⁵ X $\sqrt{t = 162}$
- i.e. award 2 marks**

Options

- 1
- ¹ $61000000e^{0.016 \times 14}$
 - ² 76000000
- 2
- ¹ $(61 \text{ million}) \times e^{0.016 \times 14}$
 - ² 76 million
- 3
- ¹ $61000000e^{0.224}$
 - ² 76 million
- 4
- ¹ $(61 \text{ million}) \times e^{0.224}$
 - ² 76000000

qu		Mk	Code	cal	Source	ss	pd	ic	C	B	A		U1	U2	U3	2.07
2.07	a	6	G29, 26	cn	09031	1	2	3		6					6	
	b	4	G21, 30	cr		1	1	2		2	2				4	

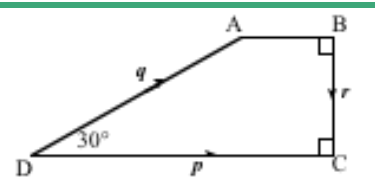
Vectors p , q and r are represented on the diagram shown where angle $ADC = 30^\circ$. It is also given that $|p| = 4$ and $|q| = 3$.

(a) Evaluate $p \cdot (q + r)$ and $r \cdot (p - q)$.

6

(b) Find $|q + r|$ and $|p - q|$.

4



The primary method m.s is based on the following generic m.s.
This generic marking scheme may be used as an equivalence guide but only where a candidate does not use the primary method or any alternative method shown in detail in the marking scheme.

- ¹ ss use distributive law
- ² ic interpret scalar product
- ³ pd processing scalar product
- ⁴ ic interpret perpendicularity
- ⁵ ic interpret scalar product
- ⁶ pd complete processing
- ⁷ ic interpret vectors on a 2-D diagram
- ⁸ pd evaluate magnitude of vector sum
- ⁹ ic interpret vectors on a 2-D diagram
- ¹⁰ pd evaluate magnitude of vector difference

Primary Method : Give 1 mark for each •

- ¹ $p \cdot q + p \cdot r$ s / i by (•² and •⁴)
- ² $4 \times 3 \cos 30^\circ$ s / i by •³
- ³ $6\sqrt{3}$ (10.4)
- ⁴ $p \cdot r = 0$ explicitly stated
- ⁵ $-|r| \times 3 \cos 120^\circ$
- ⁶ $r = \frac{3}{2}$ and ... $\frac{9}{4}$
- ⁷ $q + r \equiv$ from D to the projection of A onto DC
- ⁸ $|q + r| = \frac{3\sqrt{3}}{2}$
- ⁹ $p - q \equiv \overline{AC}$
- ¹⁰ $|p - q| = \sqrt{\left(4 - \frac{3\sqrt{3}}{2}\right)^2 + \left(\frac{3}{2}\right)^2}$ (2.05)

Notes

- $p \cdot (q + r) = pq + pr$ gains no marks unless the "vectors" are treated correctly further on. In this case treat this as bad form.
- The evidence for •⁷ and •⁹ will likely appear in a diagram with the vectors $q + r$ and $p - q$ clearly marked.

Common Errors

- For •¹ to •⁴
 $p \cdot (q + r) = p \cdot q + p \cdot r$
 $= 4 \times 3 + 4 \times \frac{3}{2}$
 $= 18$
 can only be awarded •¹.

Alternatives 1

- For •⁷ and •⁸ :
 $\sqrt{p \cdot (q + r)} = |p| |q + r| \cos 0$
 $6\sqrt{3} = 4 |q + r| \times 1$
 $\sqrt{|q + r|} = \frac{6\sqrt{3}}{4} = \frac{3\sqrt{3}}{2}$
- For •⁹, •¹⁰ :
 Using right-angled ΔABC
 $\overline{AC} = p - q$,
 and $|\overline{AB}| = 4 - \frac{3\sqrt{3}}{2}$, $|\overline{BC}| = \frac{3}{2}$
 and $\widehat{ACB} = 43.06^\circ$
 \bullet^{10} use $r \cdot (p - q) = \frac{9}{4}$
 to get $|p - q| = 2.05$

Alternatives 2

- For •⁷, •⁸, •⁹, •¹⁰ :
 Set up a coord system with origin at D
 \bullet^7 $C = (4, 0), A = \left(\frac{3\sqrt{3}}{2}, \frac{3}{2}\right), B = \left(4, \frac{3}{2}\right)$
 \bullet^8 $p = \begin{pmatrix} 4 \\ 0 \end{pmatrix}, q = \begin{pmatrix} \frac{3\sqrt{3}}{2} \\ \frac{3}{2} \end{pmatrix}, r = \begin{pmatrix} 0 \\ -\frac{3}{2} \end{pmatrix}$
 \bullet^9 $q + r = \begin{pmatrix} \frac{3\sqrt{3}}{2} \\ 0 \end{pmatrix}$ and $|q + r| = 2.60$
 \bullet^{10} $p - q = \begin{pmatrix} 4 - \frac{3\sqrt{3}}{2} \\ -\frac{3}{2} \end{pmatrix}$ and $|p - q| = 2.05$