

2013 Mathematics

Higher

Finalised Marking Instructions

© Scottish Qualifications Authority 2013

The information in this publication may be reproduced to support SQA qualifications only on a non-commercial basis. If it is to be used for any other purposes written permission must be obtained from SQA's NQ Assessment team.

Where the publication includes materials from sources other than SQA (secondary copyright), this material should only be reproduced for the purposes of examination or assessment. If it needs to be reproduced for any other purpose it is the centre's responsibility to obtain the necessary copyright clearance. SQA's NQ Assessment team may be able to direct you to the secondary sources.

These Marking Instructions have been prepared by Examination Teams for use by SQA Appointed Markers when marking External Course Assessments. This publication must not be reproduced for commercial or trade purposes.

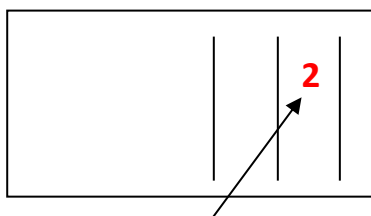
General Comments

These marking instructions are for use with the 2013 Higher Mathematics Examination.

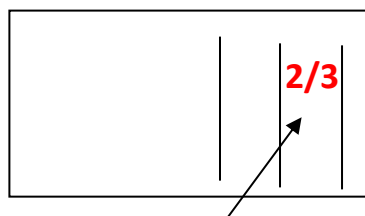
For each question the marking instructions are in two sections, namely **Illustrative Scheme** and **Generic Scheme**. The **Illustrative Scheme** covers methods which are commonly seen throughout the marking. The **Generic Scheme** indicates the rationale for which each mark is awarded. In general markers should use the **Illustrative Scheme** and only use the **Generic Scheme** where a candidate has used a method not covered in the **Illustrative Scheme**.

All markers should apply the following general marking principles throughout their marking:

- 1 Marks must be assigned in accordance with these marking instructions. In principle, marks are awarded for what is correct, rather than deducted for what is wrong.
- 2 Award one mark for each •. There are **no** half marks.
- 3 The mark awarded for **each part** of a question should be entered in the **outer** right hand margin, opposite the end of the working concerned. The marks should correspond to those on the question paper and these marking instructions. Only the mark, **as a whole number**, should be written.



Marks in this column
whole numbers only



Do not record marks on
scripts in this manner.

- 4 Where a candidate has not been awarded any marks for an attempt at a question, or part of a question, 0 should be written in the right hand margin against their answer. It should not be left blank. If absolutely no attempt at a question, or part of a question, has been made, ie a completely empty space, then NR should be written in the outer margin.
- 5 Every page of a candidate's script should be checked for working. Unless blank, every page which is devoid of a marking symbol should have a tick placed in the bottom right hand margin.
- 6 Where the solution to part of a question is fragmented and continues later in the script, the marks should be recorded at the end of the solution. This should be indicated with a down arrow (\Downarrow), in the margin, at the earlier stages.
- 7 Working subsequent to an error must be **followed through**, with possible full marks for the subsequent working, provided that the level of difficulty involved is approximately similar. Where, subsequent to an error, the working for a follow through mark has been eased, the follow through mark cannot be awarded.
- 8 As indicated on the front of the question paper, full credit should only be given where the solution contains appropriate working. Throughout this paper, unless specifically mentioned in the marking instructions, a correct answer with no working receives no credit.

9 Marking Symbols

No comments or words should be written on scripts. Please use the following symbols and those indicated on the welcome letter and from comment 6 on the previous page.

✓ A tick should be used where a piece of working is correct and gains a mark. Markers must check through the whole of a response, ticking the work only where a mark is awarded.

— X At the point where an error occurs, the error should be underlined and a cross used to indicate where a mark has not been awarded. If no mark is lost the error should only be underlined, i.e. a cross is only used where a mark is not awarded.

✓ A cross-tick should be used to indicate “correct” working where a mark is awarded as a result of **follow through** from an error.

✗ A double cross-tick should be used to indicate correct working which is irrelevant or insufficient to score any marks. This should also be used for working which has been **eased**.

~~~~ A tilde should be used to indicate a minor error which is not being penalised, e.g. **bad form**.

✓~~~~ This should be used where a candidate is given the **benefit of the doubt**.

^ A roof should be used to show that something is missing, such as part of a solution or a crucial step in the working.

These will help markers to maintain consistency in their marking and essential for the later stages of SQA procedures.

The examples below illustrate the use of the marking symbols .

### Example 1

$$y = x^3 - 6x^2$$

$$\frac{dy}{dx} = 3x^2 - 12$$

$$3x^2 - 12 = 0$$

$$x = 2$$

$$y = -16$$

- <sup>1</sup> ✓
- <sup>2</sup> ✗
- <sup>3</sup> ✗
- <sup>4</sup> ^
- <sup>5</sup> ✗

### Example 3

$$3 \sin x - 5 \cos x$$

$$k \sin x \cos a - \cos x \sin a$$

$$k \cos a = 3, k \sin a = 5$$

### Example 2

$$A(4, 4, 0), B(2, 2, 6), C(2, 2, 0)$$

$$\overline{AB} = \underline{\mathbf{b} + \mathbf{a}} = \begin{pmatrix} 6 \\ 6 \\ 6 \end{pmatrix}$$

$$\overline{AC} = \begin{pmatrix} 6 \\ 6 \\ 0 \end{pmatrix}$$

✗ •<sup>2</sup> (repeated error)

### Example 4

$$4 \left| \begin{array}{cccc} 1 & -5 & 2 & 8 \\ & 4 & -4 & -8 \\ 1 & 1 & -2 & 0 \end{array} \right.$$

Since the remainder is 0,  $x - 4$  must be a factor.

$$(x^2 - x - 2)$$

$$(x - 4)(x + 1)(x - 2)$$

$$x = 4 \text{ or } x = -1 \text{ or } x = 2$$

**10** In general, as a consequence of an error perceived to be trivial, casual or insignificant, e.g.  $6 \times 6 = 12$ , candidates lose the opportunity of gaining a mark. But note example 4 in comment 9 and the second example in comment 11.

**11** Where a transcription error (paper to script or within script) occurs, the candidate should be penalised, e.g.

This is a transcription error and so the mark is not awarded.

Eased as no longer a solution of a quadratic equation.

$$x^2 + 5x + 7 = 9x + 4 \quad \checkmark$$

$$\underline{x - 4x + 3 = 0} \quad \times$$

$$x = 1 \quad \cancel{\times}$$

Exceptionally this error is not treated as a transcription error as the candidate deals with the intended quadratic equation. The candidate has been given the benefit of the doubt.

$$x^2 + 5x + 7 = 9x + 4 \quad \checkmark$$

$$x - 4x + 3 = 0 \quad \checkmark$$

$$(x - 3)(x - 1) = 0$$

$$x = 1 \text{ or } 3 \quad \checkmark$$

**12 Cross marking**

Where a question results in two pairs of solutions, this technique should be applied, but only if indicated in the detailed marking instructions for the question.

Example: Point of intersection of line with curve

Illustrative Scheme: •<sup>5</sup>  $x = 2, x = -4$

•<sup>6</sup>  $y = 5, y = -7$

Cross marked: •<sup>5</sup>  $x = 2, y = 5$

•<sup>6</sup>  $x = -4, y = -7$

Markers should choose whichever method benefits the candidate, but **not** a combination of both.

**13** In final answers, numerical values should be simplified as far as possible.

Examples:  $\frac{15}{12}$  should be simplified to  $\frac{5}{4}$  or  $1\frac{1}{4}$        $\frac{43}{1}$  should be simplified to 43

$\frac{15}{0.3}$  should be simplified to 50

$\frac{4}{3}$  should be simplified to  $\frac{4}{15}$

$\sqrt{64}$  must be simplified to 8

The square root of perfect squares up to and including 100 must be known.

**14** Regularly occurring responses (ROR) are shown in the marking instructions to help mark common and/or non-routine solutions. RORs may also be used as a guide in marking similar non-routine candidate responses.

**15** Unless specifically mentioned in the marking instructions, the following should not be penalised:

- Working subsequent to a **correct** answer;
- Correct working in the wrong part of a question;
- Legitimate variations in numerical answers, e.g. angles in degrees rounded to nearest degree;
- Omission of units;
- Bad form;
- Repeated error within a question, but not between questions or papers.

- 16** In any ‘Show that . . .’ question, where the candidate has to arrive at a formula, the last mark of that part is not available as a follow through from a previous error.
- 17** All working should be carefully checked, even where a fundamental misunderstanding is apparent early in the candidate’s response. Marks may still be available later in the question so reference must be made continually to the marking instructions. All working must be checked: the appearance of the correct answer does not necessarily indicate that the candidate has gained all the available marks.
- 18** In the **exceptional** circumstance where you are in doubt whether a mark should or should not be awarded, consult your Team Leader (TL).
- 19** Scored out working which **has not been replaced** should be marked where still legible. However, if the scored out working **has been replaced**, only the work which has not been scored out should be marked.
- 20** Where a candidate has made multiple attempts using the same strategy, mark all attempts and award the lowest mark.  
Where a candidate has tried different strategies, apply the above ruling to attempts within each strategy and then award the highest resultant mark. For example:

|                                                                    |                                                                    |
|--------------------------------------------------------------------|--------------------------------------------------------------------|
| Strategy 1 attempt 1 is worth 3 marks                              | Strategy 2 attempt 1 is worth 1 mark                               |
| Strategy 1 attempt 2 is worth 4 marks                              | Strategy 2 attempt 2 is worth 5 marks                              |
| From the attempts using strategy 1, the resultant mark would be 3. | From the attempts using strategy 2, the resultant mark would be 1. |

In this case, award 3 marks.

- 21** It is of great importance that the utmost care should be exercised in totalling the marks.  
A tried and tested procedure is as follows:
- Step 1     Manually calculate the total from the candidate’s script.
- Step 2     Check this total using the grid issued with these marking instructions.
- Step 3     In SCORIS, enter the marks and obtain a total, which should now be compared to the manual total.
- This procedure enables markers to identify and rectify any errors in data entry before submitting each candidate’s marks.
- 22** **The candidate’s script for Paper 2 should be placed inside the script for Paper 1, and the candidate’s total score (i.e. Paper 1 Section B + Paper 2) written in the space provided on the front cover of the script for Paper 1.**
- 23** In cases of difficulty, covered neither in detail nor in principle in these instructions, markers should contact their TL in the first instance. A referral to the Principal Assessor (PA) should only be made in consultation with the TL. Further details of PA Referrals can be found in The General Marking Instructions.

**Paper 1 Section A**

| <u>Question</u> | <u>Answer</u> |
|-----------------|---------------|
| 1               | A             |
| 2               | B             |
| 3               | B             |
| 4               | A             |
| 5               | D             |
| 6               | C             |
| 7               | B             |
| 8               | C             |
| 9               | A             |
| 10              | D             |
| 11              | B             |
| 12              | C             |
| 13              | A             |
| 14              | B             |
| 15              | C             |
| 16              | C             |
| 17              | C             |
| 18              | D             |
| 19              | B             |
| 20              | D             |
| <u>Summary</u>  |               |
| A               | 4             |
| B               | 6             |
| C               | 6             |
| D               | 4             |

**Paper 1- Section B**

| Question | Generic Scheme                                                                                                                                                                                                                                     | Illustrative Scheme                                                                                                                                                                                                                                                             | Max Mark |
|----------|----------------------------------------------------------------------------------------------------------------------------------------------------------------------------------------------------------------------------------------------------|---------------------------------------------------------------------------------------------------------------------------------------------------------------------------------------------------------------------------------------------------------------------------------|----------|
| 21       | Express $2x^2 + 12x + 1$ in the form $a(x + b)^2 + c$ .                                                                                                                                                                                            |                                                                                                                                                                                                                                                                                 |          |
|          | <ul style="list-style-type: none"> <li>•<sup>1</sup> ss identify common factor</li> <li>•<sup>2</sup> ss complete the square</li> <li>•<sup>3</sup> pd process for <math>c</math></li> </ul>                                                       | <p style="text-align: center;">Method 1</p> <ul style="list-style-type: none"> <li>•<sup>1</sup> <math>2(x^2 + 6x \dots</math> <b>stated or implied by</b></li> <li>•<sup>2</sup> <math>2(x + 3)^2 \dots</math></li> <li>•<sup>3</sup> <math>2(x + 3)^2 - 17</math></li> </ul>  | <b>3</b> |
|          | <ul style="list-style-type: none"> <li>•<sup>1</sup> ss expands completed square form</li> <li>•<sup>2</sup> ss equates coefficients</li> <li>•<sup>3</sup> pd process for <math>b</math> and <math>c</math> and write in required form</li> </ul> | <p style="text-align: center;">Method 2</p> <ul style="list-style-type: none"> <li>•<sup>1</sup> <math>ax^2 + 2abx + ab^2 + c</math></li> <li>•<sup>2</sup> <math>a = 2 \quad 2ab = 12 \quad ab^2 + c = 1</math></li> <li>•<sup>3</sup> <math>2(x + 3)^2 - 17</math></li> </ul> |          |

**Notes:**

1. Correct answer without working gains full credit.

**Regularly Occurring Responses:**

|                                                                                                                                                                                                                                                                                      |                                                                                                                                                                                                                                                                                                         |
|--------------------------------------------------------------------------------------------------------------------------------------------------------------------------------------------------------------------------------------------------------------------------------------|---------------------------------------------------------------------------------------------------------------------------------------------------------------------------------------------------------------------------------------------------------------------------------------------------------|
| <p><b>Candidate A</b></p> <p><math>2(x^2 + 6x + \frac{1}{2})</math>      •<sup>1</sup> ✓</p> <p><math>2(x^2 + 6x + 9 - 9 + \frac{1}{2})</math>      •<sup>2</sup> ✓</p> <p><math>2(x + 3)^2 - 8\frac{1}{2}</math>      •<sup>3</sup> ✗</p>                                           | <p><b>Candidate B</b></p> <p><math>2x^2 + 12x + 1 = (x + 6)^2 - 36 + 1</math>      •<sup>1</sup> ✗    •<sup>2</sup> ✗</p> <p><math>= (x + 6)^2 - 35</math>      •<sup>3</sup> ✗</p>                                                                                                                     |
| <p><b>Candidate C</b></p> <p><math>a(x + b)^2 + c = ax^2 + 2abx + ab^2 + c</math>      •<sup>1</sup> ✓</p> <p><math>a = 2 \quad 2ab = 12 \quad ab^2 + c = 1</math>      •<sup>2</sup> ✓</p> <p><math>b = 3 \quad c = -17</math>      •<sup>3</sup> ✓</p>                             | <p><b>Candidate D</b></p> <p><math>ax^2 + 2abx + ab^2 + c</math>      •<sup>1</sup> ✓</p> <p><math>a = 2 \quad 2ab = 12 \quad ab^2 + c = 1</math>      •<sup>2</sup> ✓</p> <p><math>b = 3 \quad c = -17</math>      •<sup>3</sup> ✗</p>                                                                 |
| <p><b>Candidate E</b></p> <p><math>ax^2 + 2abx + ab^2 + c</math>      •<sup>1</sup> ✓</p> <p><math>a = 2 \quad 2ab = 12 \quad b^2 + c = 1</math>      •<sup>2</sup> ✗</p> <p><math>a = 2 \quad b = 3 \quad c = -8</math></p> <p><math>2(x + 3)^2 - 8</math>      •<sup>3</sup> ✓</p> | <div style="border: 1px solid black; padding: 5px; margin-bottom: 10px;"> <p>•<sup>3</sup> awarded as all working relates to completed square form</p> </div> <div style="border: 1px solid black; padding: 5px;"> <p>•<sup>3</sup> is lost as no reference is made to completed square form</p> </div> |
| <p><b>Candidate F</b></p> <p><math>2(x^2 + 12x) + 1</math>      •<sup>1</sup> ✗</p>                                                                                                                                                                                                  |                                                                                                                                                                                                                                                                                                         |

| Question                                                                                                                                                                                                    | Generic Scheme                                                                                                                                                                                                             | Illustrative Scheme                                                                                                                                              | Max Mark |
|-------------------------------------------------------------------------------------------------------------------------------------------------------------------------------------------------------------|----------------------------------------------------------------------------------------------------------------------------------------------------------------------------------------------------------------------------|------------------------------------------------------------------------------------------------------------------------------------------------------------------|----------|
| 22                                                                                                                                                                                                          | A circle $C_1$ has equation $x^2 + y^2 + 2x + 4y - 27 = 0$ .                                                                                                                                                               |                                                                                                                                                                  |          |
|                                                                                                                                                                                                             | a                                                                                                                                                                                                                          | Write down the centre and calculate the radius of $C_1$ .                                                                                                        |          |
|                                                                                                                                                                                                             | <ul style="list-style-type: none"> <li>•<sup>1</sup> ic state centre</li> <li>•<sup>2</sup> pd find radius</li> </ul>                                                                                                      | <ul style="list-style-type: none"> <li>•<sup>1</sup> <math>(-1, -2)</math></li> <li>•<sup>2</sup> <math>\sqrt{32}</math></li> </ul>                              | <b>2</b> |
| <b>Notes:</b>                                                                                                                                                                                               |                                                                                                                                                                                                                            |                                                                                                                                                                  |          |
| 1. Do not penalise candidates who use -1 and -2 for $g$ and $f$ when calculating the radius. However, candidates who use -1 and 2 or 1 and -2 lose • <sup>2</sup><br>2. $\sqrt{32}$ need not be simplified. |                                                                                                                                                                                                                            |                                                                                                                                                                  |          |
| 22                                                                                                                                                                                                          | b                                                                                                                                                                                                                          | The point $P(3, 2)$ lies on the circle $C_1$ .<br><br>Find the equation of the tangent at $P$ .                                                                  |          |
|                                                                                                                                                                                                             | <ul style="list-style-type: none"> <li>•<sup>3</sup> ss find <math>m_{\text{radius}}</math></li> <li>•<sup>4</sup> ic state <math>m_{\text{tangent}}</math></li> <li>•<sup>5</sup> ic state equation of tangent</li> </ul> | <ul style="list-style-type: none"> <li>•<sup>3</sup> 1</li> <li>•<sup>4</sup> -1</li> <li>•<sup>5</sup> <math>y - 2 = -1(x - 3)</math></li> </ul>                | <b>3</b> |
| <b>Notes:</b>                                                                                                                                                                                               |                                                                                                                                                                                                                            |                                                                                                                                                                  |          |
| 3. • <sup>5</sup> is only available as a result of using a perpendicular gradient.                                                                                                                          |                                                                                                                                                                                                                            |                                                                                                                                                                  |          |
| <b>Regularly Occurring Responses:</b>                                                                                                                                                                       |                                                                                                                                                                                                                            |                                                                                                                                                                  |          |
| <b>Candidate A</b><br>$m_{\text{radius}} = 1$ • <sup>3</sup> ✓<br><br>$\wedge$ • <sup>4</sup> ✓<br><br>equation of tangent is $y - 2 = 1(x - 3)$ • <sup>5</sup> ✗                                           |                                                                                                                                                                                                                            | <b>Candidate B</b><br>$m_{\text{radius}} = 1$ • <sup>3</sup> ✓<br><br>$m_1 m_2 = -1$<br>so $m_2 = 1$ • <sup>4</sup> ✗<br><br>$y - 2 = 1(x - 3)$ • <sup>5</sup> ✓ |          |

| Question                                                                                                                                                                                                                                                                                                                               |    | Generic Scheme                                                                                                                                                                                                                                                                                                                                                                                                         | Illustrative Scheme                                                                                                                                                                                                                                                                                                                                                                                                                                                                                                                                                                                                                                                                                                                                                    | Max Mark                                                                                                                                                                                                                                                                                                                          |
|----------------------------------------------------------------------------------------------------------------------------------------------------------------------------------------------------------------------------------------------------------------------------------------------------------------------------------------|----|------------------------------------------------------------------------------------------------------------------------------------------------------------------------------------------------------------------------------------------------------------------------------------------------------------------------------------------------------------------------------------------------------------------------|------------------------------------------------------------------------------------------------------------------------------------------------------------------------------------------------------------------------------------------------------------------------------------------------------------------------------------------------------------------------------------------------------------------------------------------------------------------------------------------------------------------------------------------------------------------------------------------------------------------------------------------------------------------------------------------------------------------------------------------------------------------------|-----------------------------------------------------------------------------------------------------------------------------------------------------------------------------------------------------------------------------------------------------------------------------------------------------------------------------------|
| 22                                                                                                                                                                                                                                                                                                                                     | c  | <p>A second circle <math>C_2</math> has centre <math>(10, -1)</math>.</p> <p>The radius of <math>C_2</math> is half of the radius of <math>C_1</math>.</p> <p>Show that the equation of <math>C_2</math> is <math>x^2 + y^2 - 20x + 2y + 93 = 0</math>.</p>                                                                                                                                                            |                                                                                                                                                                                                                                                                                                                                                                                                                                                                                                                                                                                                                                                                                                                                                                        |                                                                                                                                                                                                                                                                                                                                   |
| • <sup>6</sup>                                                                                                                                                                                                                                                                                                                         | pd | find radius                                                                                                                                                                                                                                                                                                                                                                                                            | <p>•<sup>6</sup> <math>\sqrt{8}</math> stated or implied by •<sup>7</sup></p> <p>•<sup>7</sup> <math>(x - 10)^2 + (y + 1)^2 = (\sqrt{8})^2</math></p> <p>•<sup>8</sup> <math>x^2 - 20x + 100 + y^2 + 2y + 1 = 8</math><br/>and complete</p> <p style="text-align: center;"><b>Accept</b></p> <p><math>2g = -20, 2f = 2</math>   Centre <math>(10, -1)</math></p> <p><math>g = -10, f = 1</math>   <math>g = -10, f = 1</math></p> <p>•<sup>6</sup> Centre <math>(10, -1)</math>   <math>2g = -20, 2f = 2</math></p> <p>•<sup>7</sup> <math>r = \sqrt{(-10)^2 + 1^2 - 93} = \sqrt{8}</math></p> <p>•<sup>8</sup> <math>\sqrt{32} = 2\sqrt{8}</math><br/><math>\frac{1}{2} \times \sqrt{32} = \frac{1}{2} \times 2\sqrt{8} = \sqrt{8} = \text{radius of } C_2</math></p> | <b>3</b>                                                                                                                                                                                                                                                                                                                          |
| <b>Regularly Occurring Responses:</b>                                                                                                                                                                                                                                                                                                  |    |                                                                                                                                                                                                                                                                                                                                                                                                                        |                                                                                                                                                                                                                                                                                                                                                                                                                                                                                                                                                                                                                                                                                                                                                                        |                                                                                                                                                                                                                                                                                                                                   |
| <b>Candidate C</b>                                                                                                                                                                                                                                                                                                                     |    | <b>Candidate D</b>                                                                                                                                                                                                                                                                                                                                                                                                     |                                                                                                                                                                                                                                                                                                                                                                                                                                                                                                                                                                                                                                                                                                                                                                        | <b>Candidate E</b>                                                                                                                                                                                                                                                                                                                |
| <p><math>C_2</math> centre is <math>(10, -1)</math><br/> <math>g = -10, f = 1</math><br/> <math>2g = -20, 2f = 2</math><br/> <math>x^2 + y^2 - 20x + 2y + \dots</math></p> <p>•<sup>6</sup> ✓ •<sup>7</sup> ✗ •<sup>8</sup> ✗</p>                                                                                                      |    | <p><math>x^2 + y^2 - 20x + 2y + 93 = 0</math><br/> <math>2g = -20, 2f = 2</math><br/>           centre <math>(10, -1)</math><br/>           radius = <math>\sqrt{(-10)^2 + 1^2 - 93} = \sqrt{8}</math><br/> <math>\sqrt{32} = \sqrt{4 \times 8} = 2\sqrt{8}</math><br/>           so radius of <math>C_2 = \frac{1}{2}</math> of radius of <math>C_1</math></p> <p>•<sup>6</sup> ✓ •<sup>7</sup> ✓ •<sup>8</sup> ✓</p> |                                                                                                                                                                                                                                                                                                                                                                                                                                                                                                                                                                                                                                                                                                                                                                        | <p><math>x^2 + y^2 - 20x + 2y + 93 = 0</math><br/> <math>2g = -20, 2f = 2</math><br/>           centre <math>(10, -1)</math><br/>           radius = <math>\sqrt{(-10)^2 + 1^2 - 93}</math><br/> <math>= \sqrt{8}</math><br/> <math>\sqrt{32} = 4\sqrt{8} \dots</math></p> <p>•<sup>6</sup> ✓ •<sup>7</sup> ✓ •<sup>8</sup> ✗</p> |
| <b>Candidate F</b>                                                                                                                                                                                                                                                                                                                     |    | <b>Candidate G</b>                                                                                                                                                                                                                                                                                                                                                                                                     |                                                                                                                                                                                                                                                                                                                                                                                                                                                                                                                                                                                                                                                                                                                                                                        |                                                                                                                                                                                                                                                                                                                                   |
| <p><math>x^2 + y^2 - 20x + 2y + 93</math><br/> <math>2g = -20, 2f = 2</math><br/>           centre <math>(10, -1)</math><br/>           radius = <math>\sqrt{(-10)^2 + 1^2 - 93}</math><br/> <math>= \sqrt{8}</math><br/>           which is half of <math>\sqrt{32}</math></p> <p>•<sup>6</sup> ✓ •<sup>7</sup> ✓ •<sup>8</sup> ✗</p> |    | <p><math>x^2 + y^2 - 20x + 2y + 93 = 0</math><br/> <math>2g = -20, 2f = 2</math><br/>           centre <math>(10, -1)</math><br/>           radius = <math>\sqrt{(-10)^2 + 1^2 - 93}</math><br/> <math>= \sqrt{8}</math></p> <p>•<sup>6</sup> ✓ •<sup>7</sup> ✓ •<sup>8</sup> ✗</p>                                                                                                                                    |                                                                                                                                                                                                                                                                                                                                                                                                                                                                                                                                                                                                                                                                                                                                                                        |                                                                                                                                                                                                                                                                                                                                   |

| Question                                                                                                                                                                                 |    | Generic Scheme                                                              | Illustrative Scheme                                                                                             | Max Mark |
|------------------------------------------------------------------------------------------------------------------------------------------------------------------------------------------|----|-----------------------------------------------------------------------------|-----------------------------------------------------------------------------------------------------------------|----------|
| 22                                                                                                                                                                                       | d  | Show that the tangent found in part (b) is also a tangent to circle $C_2$ . |                                                                                                                 |          |
|                                                                                                                                                                                          |    |                                                                             | <b>Method 1</b>                                                                                                 |          |
| • <sup>9</sup>                                                                                                                                                                           | ss | substitute $y = 5 - x$<br>(or $x = 5 - y$ )                                 | Substituting for $y$<br>• <sup>9</sup> $x^2 + (5 - x)^2 - 20x + 2(5 - x) + 93$                                  |          |
| • <sup>10</sup>                                                                                                                                                                          | pd | express in standard quadratic form                                          | • <sup>10</sup> $2x^2 - 32x + 128 = 0$                                                                          |          |
| • <sup>11</sup>                                                                                                                                                                          | ic | start proof                                                                 | • <sup>11</sup> $2(x - 8)^2 = 0$ • <sup>11</sup> $(-32)^2 - 4 \times 2 \times 128$                              |          |
| • <sup>12</sup>                                                                                                                                                                          | ic | complete proof                                                              | • <sup>12</sup> equal roots      • <sup>12</sup> $b^2 - 4ac = 0$<br>$\Rightarrow$ tangent $\Rightarrow$ tangent |          |
|                                                                                                                                                                                          |    |                                                                             | <b>or</b>                                                                                                       |          |
|                                                                                                                                                                                          |    |                                                                             | Substituting for $x$                                                                                            |          |
| • <sup>9</sup>                                                                                                                                                                           |    |                                                                             | • <sup>9</sup> $(5 - y)^2 + y^2 - 20(5 - y) + 2y + 93 = 0$                                                      |          |
| • <sup>10</sup>                                                                                                                                                                          |    |                                                                             | • <sup>10</sup> $2y^2 + 12y + 18 = 0$                                                                           |          |
| • <sup>11</sup>                                                                                                                                                                          |    |                                                                             | • <sup>11</sup> $2(y + 3)^2 = 0$ • <sup>11</sup> $12^2 - 4 \times 2 \times 18$                                  |          |
| • <sup>12</sup>                                                                                                                                                                          |    |                                                                             | • <sup>12</sup> equal roots      • <sup>12</sup> $b^2 - 4ac = 0$<br>$\Rightarrow$ tangent $\Rightarrow$ tangent | <b>4</b> |
|                                                                                                                                                                                          |    |                                                                             | <b>Method 2</b>                                                                                                 |          |
| • <sup>9</sup>                                                                                                                                                                           | ss | uses perpendicular gradients                                                | • <sup>9</sup> $m$ given line = $-1$ , leading to $m_{radius} = 1$                                              |          |
| • <sup>10</sup>                                                                                                                                                                          | pd | find equation of radius                                                     | • <sup>10</sup> $y + 1 = 1(x - 10)$                                                                             |          |
| • <sup>11</sup>                                                                                                                                                                          | ic | starts proof                                                                | • <sup>11</sup> $y = -x + 5$<br>$y = x - 11$<br>$\Rightarrow x = 8$<br>$y = -3$                                 |          |
| • <sup>12</sup>                                                                                                                                                                          | ic | completes proof                                                             | • <sup>12</sup> $(8)^2 + (-3)^2 - 20 \times (8) + 2(-3) + 93$<br>and complete                                   |          |
| <b>Notes:</b>                                                                                                                                                                            |    |                                                                             |                                                                                                                 |          |
| <b>Method 1</b>                                                                                                                                                                          |    |                                                                             |                                                                                                                 |          |
| 4. = 0 must appear at • <sup>9</sup> or • <sup>10</sup> stage to gain • <sup>10</sup> .                                                                                                  |    |                                                                             |                                                                                                                 |          |
| 5. Candidates who arrive at a quadratic equation which does not have equal roots cannot gain • <sup>12</sup> as follow through. ( See General Comments Note 16).                         |    |                                                                             |                                                                                                                 |          |
| 6. Where candidates do not arrive at a quadratic equation in Method 1, marks • <sup>10</sup> , • <sup>11</sup> and • <sup>12</sup> are not available.                                    |    |                                                                             |                                                                                                                 |          |
| 7. Acceptable communication for • <sup>12</sup> , ‘only one answer so implies tangent’, ‘discriminant is 0 so tangent’, ‘ $x = 8$ twice so tangent’, or equivalent relating to tangency. |    |                                                                             |                                                                                                                 |          |

| Question                                                                                                                                                                                                                                               | Generic Scheme                                                                                                                                                                                                                                                                                                                                                                               | Illustrative Scheme | Max Mark |
|--------------------------------------------------------------------------------------------------------------------------------------------------------------------------------------------------------------------------------------------------------|----------------------------------------------------------------------------------------------------------------------------------------------------------------------------------------------------------------------------------------------------------------------------------------------------------------------------------------------------------------------------------------------|---------------------|----------|
| 23 a                                                                                                                                                                                                                                                   | The expression $\sqrt{3} \sin x^\circ - \cos x^\circ$ can be written in the form $k \sin(x - a)^\circ$ , where $k > 0$ and $0 \leq a < 360$ .<br>Calculate the values of $k$ and $a$ .                                                                                                                                                                                                       |                     |          |
| <ul style="list-style-type: none"> <li>•<sup>1</sup> ss use compound angle formula</li> <li>•<sup>2</sup> ic compare coefficients</li> <li>•<sup>3</sup> pd process for <math>k</math></li> <li>•<sup>4</sup> pd process for <math>a</math></li> </ul> | <ul style="list-style-type: none"> <li>•<sup>1</sup> <math>k \sin x^\circ \cos a^\circ - k \cos x^\circ \sin a^\circ</math> <b>stated explicitly</b></li> <li>•<sup>2</sup> <math>k \cos a^\circ = \sqrt{3}</math> and <math>k \sin a^\circ = 1</math> <b>stated explicitly</b></li> <li>•<sup>3</sup> 2 ( do <b>not</b> accept <math>\sqrt{4}</math> )</li> <li>•<sup>4</sup> 30</li> </ul> | 4                   |          |

**Notes:**

1. Treat  $k \sin x^\circ \cos a^\circ - \cos x^\circ \sin a^\circ$  as bad form only if the equations at the •<sup>2</sup> stage both contain  $k$ .
2.  $2 \sin x^\circ \cos a^\circ - 2 \cos x^\circ \sin a^\circ$  or  $2(\sin x^\circ \cos a^\circ - \cos x^\circ \sin a^\circ)$  is acceptable for •<sup>1</sup> and •<sup>3</sup>.
3. Accept  $k \cos a^\circ = \sqrt{3}$  and  $-k \sin a^\circ = -1$  for •<sup>2</sup>.
4. •<sup>2</sup> is not available for  $k \cos x^\circ = \sqrt{3}$  and  $k \sin x^\circ = 1$ , however, •<sup>4</sup> is still available.
5. •<sup>3</sup> is only available for a single value of  $k$ ,  $k > 0$ .
6. •<sup>4</sup> is only available for a single value of  $a$  expressed in degrees.
7. Candidates who identify and use any form of the wave equation may gain •<sup>1</sup>, •<sup>2</sup> and •<sup>3</sup>, however, •<sup>4</sup> is only available if the value of  $a$  is interpreted for the form  $k \sin(x - a)^\circ$ .
8. Do not penalise omission of degree sign at •<sup>1</sup> or •<sup>2</sup>.

**Regularly Occurring Responses:**

Response 1: Missing information in working.

| Candidate A                                                                                                                                                                                                    | Candidate B                                                                                                                                                                                                                                                                                                                                               | Candidate C                                                                                                                                                                                                                                                                                                                                                                                                                                                                          |
|----------------------------------------------------------------------------------------------------------------------------------------------------------------------------------------------------------------|-----------------------------------------------------------------------------------------------------------------------------------------------------------------------------------------------------------------------------------------------------------------------------------------------------------------------------------------------------------|--------------------------------------------------------------------------------------------------------------------------------------------------------------------------------------------------------------------------------------------------------------------------------------------------------------------------------------------------------------------------------------------------------------------------------------------------------------------------------------|
| $\begin{aligned} 2 \cos a &= \sqrt{3} && \bullet^1 \times \\ -2 \sin a &= -1 && \bullet^2 \checkmark \\ \tan a &= \frac{1}{\sqrt{3}} && \bullet^3 \checkmark \\ a &= 30 && \bullet^4 \checkmark \end{aligned}$ | $\begin{aligned} \cos a &= \sqrt{3} && \bullet^1 \times \\ \sin a &= 1 && \bullet^2 \times \\ \tan a &= \frac{1}{\sqrt{3}} && \bullet^3 \times \\ a &= 30 && \bullet^4 \times \end{aligned}$ <div style="border: 1px solid black; padding: 5px; width: fit-content; margin: 10px auto;">             Not consistent with evidence at •<sup>2</sup> </div> | $\begin{aligned} k \sin x^\circ \cos a^\circ - k \cos x^\circ \sin a^\circ &&& \bullet^1 \checkmark \\ k \cos a &= \sqrt{3}, k \sin a = 1 && \bullet^2 \checkmark \\ k &= 2 \text{ or } -2 && \bullet^3 \times \\ \tan a &= \frac{1}{\sqrt{3}} && \bullet^4 \times \\ a &= 30 \text{ or } 210 && \\ \text{However candidates who then write} &&& \\ \sqrt{3} \sin x^\circ - \cos x^\circ &= 2 \sin(x-30)^\circ && \text{would gain } \bullet^3 \text{ and } \bullet^4 \end{aligned}$ |

Response 2: Labelling incorrect,  $\sin(A - B) = \sin A \cos B - \cos A \sin B$  from formula list.

| Candidate D                                                                                                                                                                                                                      | Candidate E                                                                                                                                                                                                                  | Candidate F                                                                                                                                                                                                                      |
|----------------------------------------------------------------------------------------------------------------------------------------------------------------------------------------------------------------------------------|------------------------------------------------------------------------------------------------------------------------------------------------------------------------------------------------------------------------------|----------------------------------------------------------------------------------------------------------------------------------------------------------------------------------------------------------------------------------|
| $\begin{aligned} k \sin A \cos B - k \cos A \sin B &&& \bullet^1 \times \\ k \cos a &= \sqrt{3} && \\ k \sin a &= 1 && \bullet^2 \checkmark \\ \tan a &= \frac{1}{\sqrt{3}} && \\ a &= 30 && \bullet^4 \checkmark \end{aligned}$ | $\begin{aligned} k \sin A \cos B - k \cos A \sin B &&& \bullet^1 \times \\ k \cos x &= \sqrt{3} && \\ k \sin x &= 1 && \bullet^2 \times \\ \tan x &= \frac{1}{\sqrt{3}} && \\ x &= 30 && \bullet^4 \checkmark \end{aligned}$ | $\begin{aligned} k \sin A \cos B - k \cos A \sin B &&& \bullet^1 \times \\ k \cos B &= \sqrt{3} && \\ k \sin B &= 1 && \bullet^2 \checkmark \\ \tan B &= \frac{1}{\sqrt{3}} && \\ B &= 30 && \bullet^4 \checkmark \end{aligned}$ |

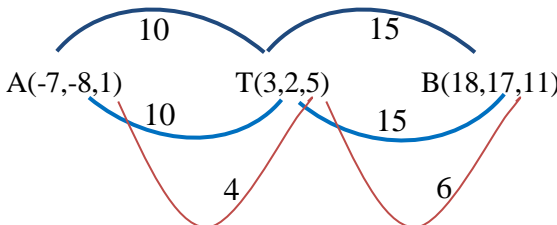
| Question                                                                                                                                                                                                                                                                                                                                                                                                                                                                                                                                                                                                                                                                                                                                                                                                             |    | Generic Scheme                                                                                          | Illustrative Scheme                                | Max Mark                  |
|----------------------------------------------------------------------------------------------------------------------------------------------------------------------------------------------------------------------------------------------------------------------------------------------------------------------------------------------------------------------------------------------------------------------------------------------------------------------------------------------------------------------------------------------------------------------------------------------------------------------------------------------------------------------------------------------------------------------------------------------------------------------------------------------------------------------|----|---------------------------------------------------------------------------------------------------------|----------------------------------------------------|---------------------------|
| 23                                                                                                                                                                                                                                                                                                                                                                                                                                                                                                                                                                                                                                                                                                                                                                                                                   | b  | Determine the maximum value of $4 + 5 \cos x^\circ - 5\sqrt{3} \sin x^\circ$ , where $0 \leq x < 360$ . |                                                    |                           |
| • <sup>5</sup>                                                                                                                                                                                                                                                                                                                                                                                                                                                                                                                                                                                                                                                                                                                                                                                                       | ic | interpret expression                                                                                    | • <sup>5</sup> $4 - 5 \times 2 \sin(x - 30)^\circ$ | 2                         |
| • <sup>6</sup>                                                                                                                                                                                                                                                                                                                                                                                                                                                                                                                                                                                                                                                                                                                                                                                                       | pd | state maximum                                                                                           | • <sup>6</sup> 14                                  |                           |
| <b>Notes:</b>                                                                                                                                                                                                                                                                                                                                                                                                                                                                                                                                                                                                                                                                                                                                                                                                        |    |                                                                                                         |                                                    |                           |
| <p>9. A solution using calculus gains no marks unless angles are converted to radian measure before differentiating.</p> <p>10. 'Maximum = 14' with no working gains no marks.</p> <p>11. •<sup>5</sup> is awarded for demonstrating a clear link between the expression in (b) and the wave in part (a)</p> <p>12. Candidates who start afresh, and use any form of the wave function to arrive at <math>4 \pm 10\cos(\dots)</math> or <math>4 \pm 10\sin(\dots)</math> correctly, can gain both •<sup>5</sup> and •<sup>6</sup>.</p> <p>13. •<sup>6</sup> is only available if, at the •<sup>5</sup> stage, the candidate's answer in (a) is multiplied by an integer <math>k</math>, <math>k \neq \pm 1</math>.</p> <p>14. Candidates who equate the given expression to 0 and attempt to solve gain 0 marks.</p> |    |                                                                                                         |                                                    |                           |
| <b>Regularly Occurring Responses:</b>                                                                                                                                                                                                                                                                                                                                                                                                                                                                                                                                                                                                                                                                                                                                                                                |    |                                                                                                         |                                                    |                           |
| <b>Candidate J</b>                                                                                                                                                                                                                                                                                                                                                                                                                                                                                                                                                                                                                                                                                                                                                                                                   |    |                                                                                                         | <b>Candidate K</b>                                 |                           |
| $4 - 5 \times 2\sin(x - 60)^\circ$                                                                                                                                                                                                                                                                                                                                                                                                                                                                                                                                                                                                                                                                                                                                                                                   |    |                                                                                                         | • <sup>5</sup> ✓                                   | $4 + 2\sin(x - 30)^\circ$ |
| Max = 14                                                                                                                                                                                                                                                                                                                                                                                                                                                                                                                                                                                                                                                                                                                                                                                                             |    |                                                                                                         | • <sup>6</sup> ✓                                   | • <sup>5</sup> ✗          |
|                                                                                                                                                                                                                                                                                                                                                                                                                                                                                                                                                                                                                                                                                                                                                                                                                      |    |                                                                                                         |                                                    | Max 2 + 4                 |
|                                                                                                                                                                                                                                                                                                                                                                                                                                                                                                                                                                                                                                                                                                                                                                                                                      |    |                                                                                                         |                                                    | Max = 6                   |
|                                                                                                                                                                                                                                                                                                                                                                                                                                                                                                                                                                                                                                                                                                                                                                                                                      |    |                                                                                                         |                                                    | • <sup>6</sup> ✗          |

| Question       |    |                     | Generic Scheme                                                                 | Illustrative Scheme | Max Mark |
|----------------|----|---------------------|--------------------------------------------------------------------------------|---------------------|----------|
| 24             | a  | i                   | Show that the points A(-7, -8, 1), T(3, 2, 5) and B(18, 17, 11) are collinear. |                     |          |
| 24             | a  | ii                  | Find the ratio in which T divides AB.                                          |                     |          |
| • <sup>1</sup> | ss | use vector approach |                                                                                | • <sup>1</sup>      | 4        |
| • <sup>2</sup> | ic | compare two vectors |                                                                                | • <sup>2</sup>      |          |
| • <sup>3</sup> | ic | complete proof      |                                                                                | • <sup>3</sup>      |          |
| • <sup>4</sup> | ic | state ratio         |                                                                                | • <sup>4</sup>      |          |

### Notes:

- Any appropriate combination of vectors is acceptable.
- <sup>3</sup> can only be awarded if a candidate has stated, common point, parallel (common direction) and collinear.
- Treat  $\begin{pmatrix} 10 \\ 10 \\ 4 \end{pmatrix}$  written as (10, 10, 4) as bad form.
- Accept 1:  $\frac{3}{2}$  or  $\frac{2}{3}$ : 1
- <sup>3</sup> requires evidence of vectors being parallel, simply stating parallel is insufficient.

### Regularly Occurring Responses:

| Candidate A                                                                                                                                                                                                                                                                                                                                                                                                                                                   | Candidate B                                                                                                                                                                                                                                                                                                                          | Candidate C                                                                                                                                                                                                                                                                                                                          |
|---------------------------------------------------------------------------------------------------------------------------------------------------------------------------------------------------------------------------------------------------------------------------------------------------------------------------------------------------------------------------------------------------------------------------------------------------------------|--------------------------------------------------------------------------------------------------------------------------------------------------------------------------------------------------------------------------------------------------------------------------------------------------------------------------------------|--------------------------------------------------------------------------------------------------------------------------------------------------------------------------------------------------------------------------------------------------------------------------------------------------------------------------------------|
| $\vec{AT} = 2 \begin{pmatrix} 5 \\ 5 \\ 2 \end{pmatrix}$ $\vec{TB} = 3 \begin{pmatrix} 5 \\ 5 \\ 2 \end{pmatrix}$ • <sup>2</sup> ✓                                                                                                                                                                                                                                                                                                                            | $\vec{AT} = \begin{pmatrix} 10 \\ 10 \\ 4 \end{pmatrix}$ or $\vec{TB} = \begin{pmatrix} 15 \\ 15 \\ 6 \end{pmatrix}$ • <sup>1</sup> ✓<br><br>$\vec{TB} = \frac{2}{3} \vec{AT}$ • <sup>2</sup> ✗<br><br>TB and AT are parallel, T is a common point so A, T and B are collinear. • <sup>3</sup> ✓<br><br>AT:TB = 2:3 • <sup>4</sup> ✗ | $\vec{AT} = \begin{pmatrix} 10 \\ 10 \\ 4 \end{pmatrix}$ or $\vec{TB} = \begin{pmatrix} 15 \\ 15 \\ 6 \end{pmatrix}$ • <sup>1</sup> ✓<br><br>$\vec{TB} = \frac{2}{3} \vec{AT}$ • <sup>2</sup> ✗<br><br>TB and AT are parallel, T is a common point so A, T and B are collinear. • <sup>3</sup> ✓<br><br>AT:TB = 3:2 • <sup>4</sup> ✓ |
| <b>Candidate D</b><br><br>$\vec{AT} = \begin{pmatrix} 10 \\ 10 \\ 4 \end{pmatrix}$ or $\vec{TB} = \begin{pmatrix} 15 \\ 15 \\ 6 \end{pmatrix}$ • <sup>1</sup> ✓<br>$\vec{TB} = \frac{2}{3} \vec{AT}$ • <sup>2</sup> ✗<br>TB and AT are parallel. T is a common point so A, T and B are collinear. • <sup>3</sup> ✓<br><br><br>$10:15 = 10:15 = 4:6 = 2:3$ • <sup>4</sup> ✓ |                                                                                                                                                                                                                                                                                                                                      |                                                                                                                                                                                                                                                                                                                                      |

| Question                                                                                                               |    | Generic Scheme                                                                                                | Illustrative Scheme                                                                                              | Max Mark |
|------------------------------------------------------------------------------------------------------------------------|----|---------------------------------------------------------------------------------------------------------------|------------------------------------------------------------------------------------------------------------------|----------|
| 24                                                                                                                     | b  | The point C lies on the $x$ -axis.<br>If TB and TC are perpendicular, find the coordinates of C.              |                                                                                                                  |          |
| • <sup>5</sup>                                                                                                         | ic | <b>Method 1</b><br>interpret C                                                                                | • <sup>5</sup> $(c, 0, 0)$                                                                                       | <b>5</b> |
| • <sup>6</sup>                                                                                                         | pd | use vector approach                                                                                           | • <sup>6</sup> $\overrightarrow{TC} = \begin{pmatrix} c-3 \\ -2 \\ -5 \end{pmatrix}$                             |          |
| • <sup>7</sup>                                                                                                         | ss | know to use scalar product equal to 0                                                                         | • <sup>7</sup> $\overrightarrow{TB} \cdot \overrightarrow{TC} = 0$                                               |          |
| • <sup>8</sup>                                                                                                         | pd | start to solve                                                                                                | • <sup>8</sup> $15(c-3) + 15 \times (-2) + 6 \times (-5) \dots$                                                  |          |
| • <sup>9</sup>                                                                                                         | pd | complete                                                                                                      | • <sup>9</sup> $c = 7$                                                                                           |          |
|                                                                                                                        |    | <b>Method 2</b>                                                                                               | <b>Method 2</b>                                                                                                  |          |
| • <sup>5</sup>                                                                                                         | ic | interpret C                                                                                                   | • <sup>5</sup> $(c, 0, 0)$                                                                                       |          |
| • <sup>6</sup>                                                                                                         | pd | use vector approach                                                                                           | • <sup>6</sup> $\overrightarrow{TC} = \begin{pmatrix} c-3 \\ -2 \\ -5 \end{pmatrix}$                             |          |
| • <sup>7</sup>                                                                                                         | ss | know to use Pythagoras and calculate $ \overrightarrow{TC} $ or $ \overrightarrow{TB} $                       | • <sup>7</sup> $ \overrightarrow{TC}  = \sqrt{(c-3)^2 + 4 + 25}$                                                 |          |
| • <sup>8</sup>                                                                                                         | pd | calculate the other two lengths                                                                               | • <sup>8</sup> $ \overrightarrow{TB}  = \sqrt{486}$ and<br>$ \overrightarrow{BC}  = \sqrt{(c-18)^2 + 289 + 121}$ |          |
| • <sup>9</sup>                                                                                                         | pd | complete                                                                                                      | • <sup>9</sup> $c = 7$                                                                                           |          |
| <b>Notes:</b>                                                                                                          |    |                                                                                                               |                                                                                                                  |          |
| 6. In Method 1, = 0 must appear at • <sup>7</sup> or • <sup>8</sup> for • <sup>9</sup> to be available.                |    |                                                                                                               |                                                                                                                  |          |
| 7. In Method 1, candidates who use $\overrightarrow{TB} \cdot \overrightarrow{TC} = -1$ can gain a maximum of 4 marks. |    |                                                                                                               |                                                                                                                  |          |
| 8. C must appear in coordinate form at • <sup>5</sup> or • <sup>9</sup> for • <sup>5</sup> to be awarded.              |    |                                                                                                               |                                                                                                                  |          |
| 9. If C has more than one non-zero coordinate • <sup>9</sup> is not available.                                         |    |                                                                                                               |                                                                                                                  |          |
| 10. • <sup>8</sup> is only available for expressions with an unknown.                                                  |    |                                                                                                               |                                                                                                                  |          |
| <b>Regularly Occurring Responses:</b>                                                                                  |    |                                                                                                               |                                                                                                                  |          |
| <b>Candidate E</b>                                                                                                     |    | <b>Candidate F</b>                                                                                            |                                                                                                                  |          |
| $C = (c, 0, 0)$ • <sup>5</sup> ✓                                                                                       |    | $15(c-3) + 15 \times (-2) + 6 \times (-5) = 0$                                                                |                                                                                                                  |          |
| $\overrightarrow{TC} = \begin{pmatrix} c-3 \\ -2 \\ -5 \end{pmatrix}$ • <sup>6</sup> ✓                                 |    | $c = 7$                                                                                                       |                                                                                                                  |          |
| $\overrightarrow{TB} \cdot \overrightarrow{TC} = -1$ • <sup>7</sup> ✗                                                  |    | $(7, 0, 0)$ <b>Gains full marks</b>                                                                           |                                                                                                                  |          |
| $15(c-3) + 15(-2) + 6(-5) = -1$ • <sup>8</sup> ✓                                                                       |    | <b>Candidate G</b>                                                                                            |                                                                                                                  |          |
| $c = \frac{104}{15}$ • <sup>9</sup> ✓                                                                                  |    | $\overrightarrow{TC} = c - \begin{pmatrix} 3 \\ 2 \\ 5 \end{pmatrix}$ • <sup>6</sup> ^                        |                                                                                                                  |          |
|                                                                                                                        |    | $\overrightarrow{TB} \cdot \overrightarrow{TC} = 15(c-3) + 15(c-2) + 6(c-5)$ • <sup>8</sup> ✗                 |                                                                                                                  |          |
|                                                                                                                        |    | It is not clear at • <sup>6</sup> what is meant by 'c' so • <sup>8</sup> cannot be awarded as follow through. |                                                                                                                  |          |
|                                                                                                                        |    | <b>However</b><br>$\overrightarrow{TC} = \begin{pmatrix} x-3 \\ y-2 \\ z-5 \end{pmatrix}$ • <sup>6</sup> ✗    |                                                                                                                  |          |